



THE GLOBE PROGRAM

A Worldwide Science and Education Program



Soil (Pedosphere)

Soil Characterization

Soil Characterization Protocol





Goals and Objectives of this Module

Overview

This module:

- Describes how defining a soil characterization site supports scientific understanding of the Earth system
- Provides step-by-step instructions in how to characterize soils using this GLOBE protocol

Learning Objectives

After completing this module, you will be able to:

- Explain why soil characteristics are important
- Conduct soil characterization steps
- Report these data to GLOBE
- Visualize these data using GLOBE's Visualization Site

Estimated time needed for completion of this module: 1.5 hours

A. Why characterize soil profiles?

B. Describe the soil profile

C. Soil Structure

D. Soil Color

E. Soil Consistence

F. Soil Texture

G. Rocks, Roots, and Carbonates

H. Report Data to GLOBE

I. Visualize Data

J. Quiz Yourself

K. Additional Resources



A. Why characterize soil profiles?

B. Describe the soil profile

C. Soil Structure

D. Soil Color

E. Soil Consistence

F. Soil Texture

G. Rocks, Roots, and Carbonates

H Report Data to GLOBE

I. Visualize Data

J. Quiz Yourself

K. Additional Resources

Why is defining soil characteristics important?

Soil characterization is a fundamental step in describing and analyzing soil as part of the Earth system. The characteristics you identify will help to explain the role of the soil in exchanging matter and transferring energy with the atmosphere, biosphere and hydrosphere.

Soil characterization measurements are taken for many reasons, including:

- supporting the interpretation of soil moisture and temperature, land cover, and atmosphere measurements;
- complementing and extending land cover mapping;
- developing soil maps of a region; and
- providing information for computer modeling.

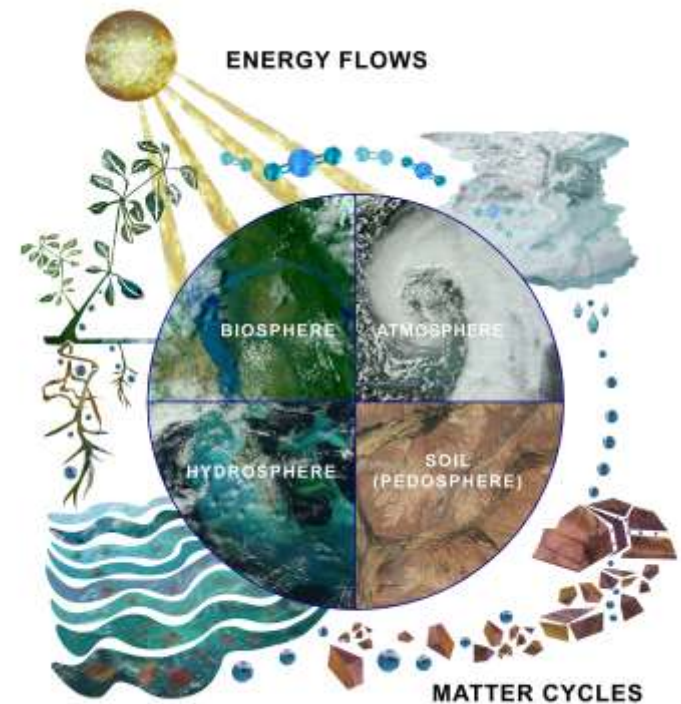


Image: Jenn Glaser and Russanne Low



Introduction to Soil Characterization

Soil can be characterized by its structure, color, consistence, texture, and abundance of roots, rocks, and carbonates. These characteristics allow scientists to interpret how the ecosystem functions and make recommendations for soil use that have a minimal impact on the ecosystem. For example, soil characterization data can help determine whether a garden should be planted or a school should be built. Soil characterization data can help scientists predict the likelihood of flooding and drought. It can help them to determine the types of vegetation and land use best suited to a location. Soil characteristics also help explain patterns observed from satellite imagery, vegetation growth across the landscape, or trends of soil moisture and temperature that might be related to weather.



Soil profile, exposed during a flood in 2013. Boulder Colorado, USA

A. Why
characterize
soil profiles?

B. Describe the
soil profile

C. Soil Structure

D. Soil Color

E. Soil
Consistence

F. Soil Texture

G. Rocks, Roots,
and Carbonates

H Report Data
to GLOBE

I. Visualize Data

J. Quiz Yourself

K. Additional
Resources



Overview of Protocol

Time:

Preparation: 2-3 45 minute class sessions

Field: 90 minutes

Experience Level: All

Frequency:

Soil characterization measurements are taken once for a specific soil site. Collected samples can be stored for study and analysis at another time during the school year.

Prerequisites:

[Selecting and Defining a Site for Soil Characterization Protocols: Exposing a Soil Profile](#)

Documents:

[Soil Characterization Protocol](#)
[Site Definition Sheet](#)

A. Why characterize soil profiles?

B. Describe the soil profile

C. Soil Structure

D. Soil Color

E. Soil Consistence

F. Soil Texture

G. Rocks, Roots, and Carbonates

H Report Data to GLOBE

I. Visualize Data

J. Quiz Yourself

K. Additional Resources



Required Materials

- Spray bottle
- Golf tees, nails or other horizon markers
- Soil color book
- Pencil, pen, marking pen
- Paper towels
- Trowel, shovel or other digging device
- Meter stick or tape measure
- Plastic bags
- Camera
- Latex gloves
- Acid bottle filled with vinegar
- Hammer
- #10 sieve (2 mm mesh openings)
- Sheets of paper or paper plates
- GLOBE Site definition sheet






What Soil Characterization Reveals:

Characteristics of the different soil horizons at depth:

- determine how water is stored in and moves through the soil
- indicate suitability for categories of land use
- whether there is adequate drainage
- what plants will grow and what nutrients are available
- reveal the history of a site - past climates and human settlement
- influence the local ecology and may limit what can live there.



Grassland soil in Texas, USA. The dark color at the top, in the A horizon, evidences high organic content (fertility) resulting from centuries of root decomposition. Source: GLOBE. Teacher's Guide.

A. Why characterize soil profiles?

B. Describe the soil profile

C. Soil Structure

D. Soil Color

E. Soil Consistence

F. Soil Texture

G. Rocks, Roots, and Carbonates

H Report Data to GLOBE

I. Visualize Data

J. Quiz Yourself

K. Additional Resources



Characterization of an Exposed Soil Profile

Follow the instructions in the Selecting, Exposing, and Defining a Soil Characterization Protocol to expose a soil profile for characterization.

These instructions apply to an exposed profile found in a road cut or erosional feature, as well as profiles exposed using the Pit method. This method is adapted for profiles exposed using the Auger Method and will follow.

Starting from the top, observe the profile to determine properties and differences between horizons.



A. Why characterize soil profiles?

B. Describe the soil profile

C. Soil Structure

D. Soil Color

E. Soil Consistence

F. Soil Texture

G. Rocks, Roots, and Carbonates

H Report Data to GLOBE

I. Visualize Data

J. Quiz Yourself

K. Additional Resources



Identifying Soil Horizons

Starting from the top, you will observe the soil looking for differences between layers.

Look for: different colors and shapes, roots, the size and amount of rocks, small dark nodules (called concretions), worms or other small animals and insects, worm channels, and anything else that is noticeable.

To identify the top and bottom of each horizon, a golf tee or other marker is placed at each depth where you see a change in the appearance of the soil.

A soil layer must be at least 3 cm thick to be considered a Horizon. If you see a layer that is less than 3 cm thick, consider it a part of the horizon above or below and note this in your metadata.



A. Why characterize soil profiles?

B. Describe the soil profile

C. Soil Structure

D. Soil Color

E. Soil Consistence

F. Soil Texture

G. Rocks, Roots, and Carbonates

H Report Data to GLOBE

I. Visualize Data

J. Quiz Yourself

K. Additional Resources



Identifying the First Horizon

A. Why characterize soil profiles?

B. Describe the soil profile

C. Soil Structure

D. Soil Color

E. Soil Consistence

F. Soil Texture

G. Rocks, Roots, and Carbonates

H Report Data to GLOBE

I. Visualize Data


J. Quiz Yourself

K. Additional Resources

The top or first horizon always starts at the surface of the soil and is always measured as 0 cm.

The bottom of the first horizon is where a difference in color, consistence, structure, chemistry, texture is evidenced by a change in appearance.

The bottom of one horizon is the top of the next horizon down. So, where Horizon 1 ends is where Horizon 2 begins.





Identifying the Second Horizon

A. Why characterize soil profiles?

B. Describe the soil profile

C. Soil Structure

D. Soil Color

E. Soil Consistence

F. Soil Texture

G. Rocks, Roots, and Carbonates

H Report Data to GLOBE

I. Visualize Data


J. Quiz Yourself

K. Additional Resources

The top or first horizon always starts at the surface of the soil and is always measured as 0 cm.

Where the soil changes appearance is the bottom of the first horizon and the top of the second horizon.

Where the soil again changes in appearance is the bottom of the second horizon.





Identifying the Second Horizon

A. Why characterize soil profiles?

B. Describe the soil profile

C. Soil Structure

D. Soil Color

E. Soil Consistence

F. Soil Texture

G. Rocks, Roots, and Carbonates

H. Report Data to GLOBE

I. Visualize Data

J. Quiz Yourself

K. Additional Resources


The top or first horizon always starts at the surface of the soil and is always measured as 0 cm.

Where the soil changes appearance is the bottom of the first horizon and the top of the second horizon.

Where the soil again changes in appearance is the bottom of the second horizon and the top of the third horizon.

Where the soil again changes in appearance is the bottom of the third horizon.

In this soil profile, the third horizon ends below 1 meter in depth. If your pit were only 1 meter deep, you would report in your metadata that the lowest horizon extended below your pit.





Describing Soil Horizons: Exposed Profile

A. Why characterize soil profiles?

B. Describe the soil profile

C. Soil Structure

D. Soil Color

E. Soil Consistence

F. Soil Texture

G. Rocks, Roots, and Carbonates

H. Report Data to GLOBE

I. Visualize Data

J. Quiz Yourself

K. Additional Resources

Photograph the profile with a meter stick marking horizon depths and with horizons marked.

Place the 0 cm of the meter stick at the top of the profile.

Make sure the sun is shining on the profile to best show any differences in color or ped shape.

If you don't have an exposed soil profile available, you can create a profile using an auger, as described in the following slides.



Pit Image courtesy Dr. Ray Weil, University of Maryland. Labels are specific to this profile only.



Describing Soil Horizons: Auger Profile

A. Why characterize soil profiles?

B. Describe the soil profile

C. Soil Structure

D. Soil Color

E. Soil Consistence

F. Soil Texture

G. Rocks, Roots, and Carbonates

H. Report Data to GLOBE

I. Visualize Data

J. Quiz Yourself

K. Additional Resources

Once the augered profile is laid out, it will yield a soil profile like the soil below the surface.

Identify the top and bottom depths of the profile's horizons and enter them into Data Entry App to set up your Soil Characterization Sample Site.

A soil layer must be at least 3 cm thick to be considered a Horizon.

If you see a layer that is less than 3 cm thick, consider it a part of the horizon above or below and note this in your metadata.



This photograph shows soil derived from auger sampling, laid out on a tarp, with soil depth adjusted according to instructions in the Selecting, Exposing and Defining a Soil Characterization Site Protocol. Golf tees are placed where each soil horizon begins and ends.



Measuring Soil Horizons in an Auger Profile

A. Why characterize soil profiles?

B. Describe the soil profile

C. Soil Structure

D. Soil Color

E. Soil Consistence

F. Soil Texture

G. Rocks, Roots, and Carbonates

H. Report Data to GLOBE

I. Visualize Data

J. Quiz Yourself

K. Additional Resources

Remember, the top of the top horizon always starts with a measurement of 0 cm so put the top of your ruler there.

The bottom of one horizon is the exact same depth as the top of the horizon directly below it.

These are the horizons you will be characterizing and sampling if you do laboratory analysis.

Once the profile has been analyzed and horizons identified, photograph the profile, making sure that the profile is equally illuminated by the sun (no shadows).



Augered soil profile with golf tees showing the horizons. Used with permission from Mid Valley Secondary Center, Throop, PA USA



A. Why characterize soil profiles?

B. Describe the soil profile

C. Soil Structure

D. Soil Color

E. Soil Consistence

F. Soil Texture

G. Rocks, Roots, and Carbonates

H. Report Data to GLOBE

I. Visualize Data

J. Quiz Yourself

K. Additional Resources

Horizon Properties: Soil Structure





What is Soil Structure?

A soil horizon's structure refers to the natural shape of aggregates of soil particles, called peds, in the soil. The soil structure provides information about the size and shape of pore spaces in the soil through which water and air flow, and in which plant roots grow.

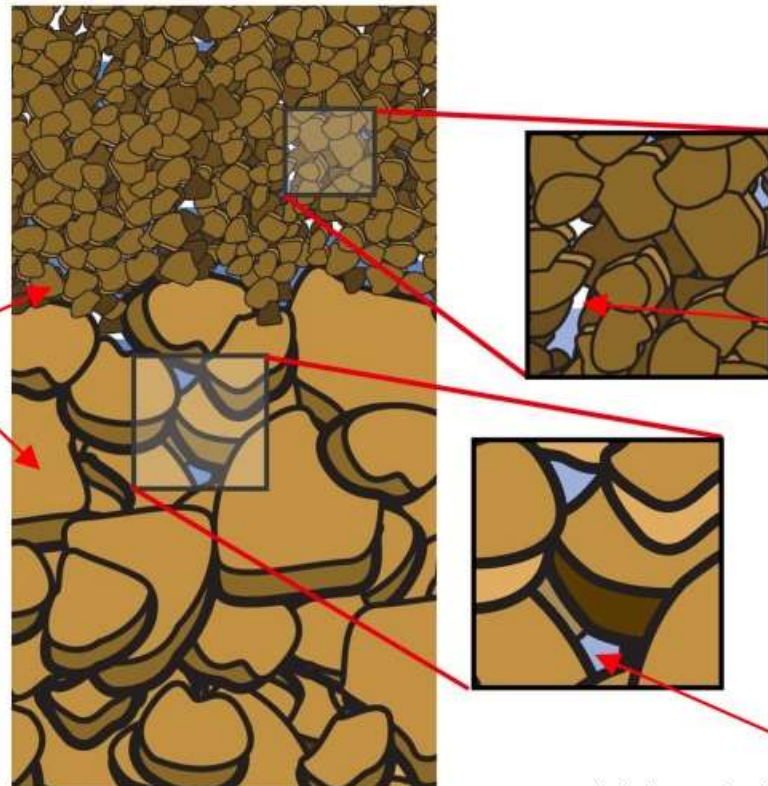
A horizon with a smaller sized ped structure will have more but smaller air pockets.

A horizon with a larger sized ped structure will have fewer but larger air pockets.

Soil Peds

Air

Water 16



A. Why characterize soil profiles?

B. Describe the soil profile

C. Soil Structure

D. Soil Color

E. Soil Consistence

F. Soil Texture

G. Rocks, Roots, and Carbonates

H Report Data to GLOBE

I. Visualize Data

J. Quiz Yourself

K. Additional Resources




What Soil Structure Reveals


The soil structure provides information about the size and shape of pore spaces in the soil through which water and air flow, and in which plant roots grow. Here are the 7 Soil Structure Types:



Granular



Blocky



Massive



Single Grained



Prismatic



Columnar



Platy

Single Grained and Massive images courtesy/Izolda Tracktenberg; other images courtesy NASA.

A. Why characterize soil profiles?

B. Describe the soil profile

C. Soil Structure

D. Soil Color

E. Soil Consistence

F. Soil Texture

G. Rocks, Roots, and Carbonates

H. Report Data to GLOBE

I. Visualize Data

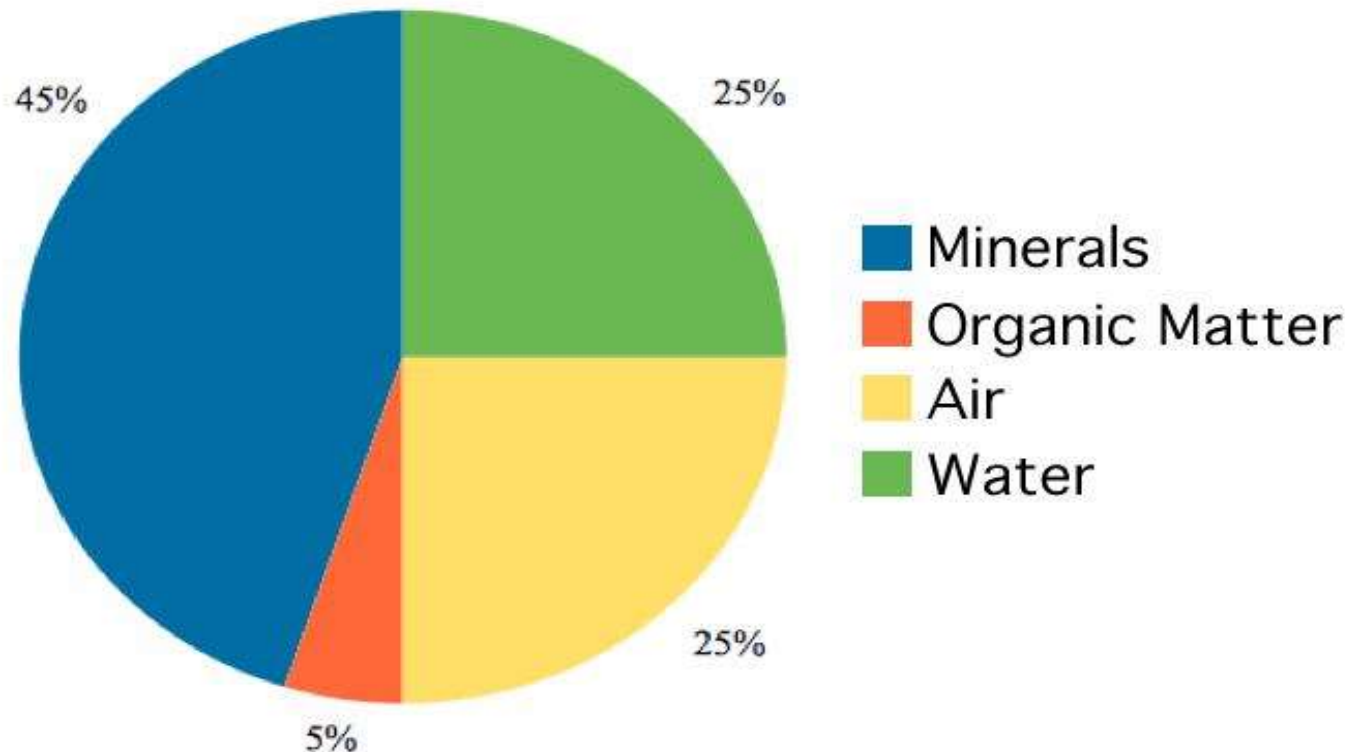
J. Quiz Yourself

K. Additional Resources



An Ideal Arable Soil

In an ideal arable soil, there is sufficient mineral content to allow growth and root purchase, there is sufficient water for plant water and nutrient uptake, and there is sufficient pore space for plant growth.



A. Why characterize soil profiles?

B. Describe the soil profile

C. Soil Structure

D. Soil Color

E. Soil Consistence

F. Soil Texture

G. Rocks, Roots, and Carbonates

H Report Data to GLOBE

I. Visualize Data

J. Quiz Yourself

K. Additional Resources



Examining a Ped

- For each part of this protocol, start with a clump of soil, called a “ped”.
- Remember, you can change a soil’s structure by doing anything other than looking at it.
- Use a trowel or other digging device to remove a soil sample from the horizon being studied.
- Hold the sample gently in your hand and look closely at the soil to examine its structure.
- Identify the soil structure of the horizon you are examining. See options in the next slides.



A. Why characterize soil profiles?

B. Describe the soil profile

C. Soil Structure

D. Soil Color

E. Soil Consistence

F. Soil Texture

G. Rocks, Roots, and Carbonates

H. Report Data to GLOBE

I. Visualize Data

J. Quiz Yourself

K. Additional Resources



Granular and Block Structure

A. Why characterize soil profiles?

B. Describe the soil profile

C. Soil Structure

D. Soil Color

E. Soil Consistence

F. Soil Texture

G. Rocks, Roots, and Carbonates

H. Report Data to GLOBE

I. Visualize Data

J. Quiz Yourself

K. Additional Resources

Soils With Structure:

Granular




Granular sample image courtesy NASA



Granular: Resembles cookie crumbs and is usually less than 0.5 cm in diameter. Commonly found in surface horizons where roots have been growing

Blocky



Blocky sample image courtesy NASA



Blocky: Irregular blocks that are usually 1.5-5.0 cm in diameter.



Prismatic, Columnar and Platy Structure

A. Why characterize soil profiles?

B. Describe the soil profile

C. Soil Structure

D. Soil Color

E. Soil Consistence

F. Soil Texture

G. Rocks, Roots, and Carbonates

H. Report Data to GLOBE

I. Visualize Data

J. Quiz Yourself

K. Additional Resources

Soils With Structure:

Prismatic



Prismatic sample image courtesy NASA



Prismatic structure illustration courtesy Rich Potter

Prismatic: Vertical columns of soil; usually found in lower horizons.

Columnar



Columnar sample image courtesy NASA



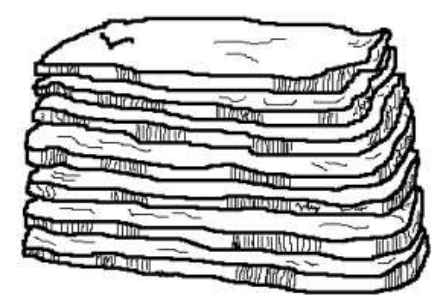
Columnar structure illustration courtesy, Rich Potter

Columnar: Vertical columns of soil that have a salt "cap" at the top. Found in soils of arid climates.

Platy



Platy sample image courtesy NASA



Platy structure courtesy, Izolda Trakhtenberg

Platy: Thin, flat plates of soil that lie horizontally; usually found in compacted soil.



Soil Lacking Structure

A. Why characterize soil profiles?

B. Describe the soil profile

C. Soil Structure

D. Soil Color

E. Soil Consistence

F. Soil Texture

G. Rocks, Roots, and Carbonates

H. Report Data to GLOBE

I. Visualize Data


J. Quiz Yourself

K. Additional Resources

Single Grained



Massive



If the soil lacks structure, it is described as either single grained or massive. Soil with “single grained structure always has a loose consistence.



A. Why characterize soil profiles?

B. Describe the soil profile

C. Soil Structure

D. Soil Color

E. Soil Consistence

F. Soil Texture

G. Rocks, Roots, and Carbonates

H. Report Data to GLOBE

I. Visualize Data

J. Quiz Yourself

K. Additional Resources

Horizon Properties: Soil Color





What Soil Color Reveals

Soil color indicates the chemical content of the soil or the coatings on the soil particles. For instance, dark colors usually indicate the presence of organic material. The presence of Iron and some other minerals can produce red and yellow soils.

A. Why characterize soil profiles?

B. Describe the soil profile

C. Soil Structure

D. Soil Color

E. Soil Consistence

F. Soil Texture

G. Rocks, Roots, and Carbonates

H. Report Data to GLOBE

I. Visualize Data

J. Quiz Yourself

K. Additional Resources



Soil profile image courtesy, NRCS, USDA

High in Organic Matter



Soil profile image courtesy, NRCS, USDA

Contains Iron Oxide



Soil Color- Required Conditions and Instruments

To complete the protocol, you will need:

1. Sunny day



Observe soil color outside under the sun.

2. Ped of soil



A ped is an aggregate of soil particles.

3. Spray mist bottle



To observe soil color, moisten the ped.

4. GLOBE Soil Color Book



Use a GLOBE-approved Soil Color Book.

Instrument Specifications: A Soil Color Book designed especially for The GLOBE Program can be purchased. It contains at least 200 colors and uses the Munsell System of Color Notation.

A. Why characterize soil profiles?

B. Describe the soil profile

C. Soil Structure

D. Soil Color

E. Soil Consistence

F. Soil Texture

G. Rocks, Roots, and Carbonates

H. Report Data to GLOBE

I. Visualize Data

J. Quiz Yourself

K. Additional Resources



A. Why characterize soil profiles?

B. Describe the soil profile

C. Soil Structure

D. Soil Color

E. Soil Consistence

F. Soil Texture

G. Rocks, Roots, and Carbonates

H. Report Data to GLOBE

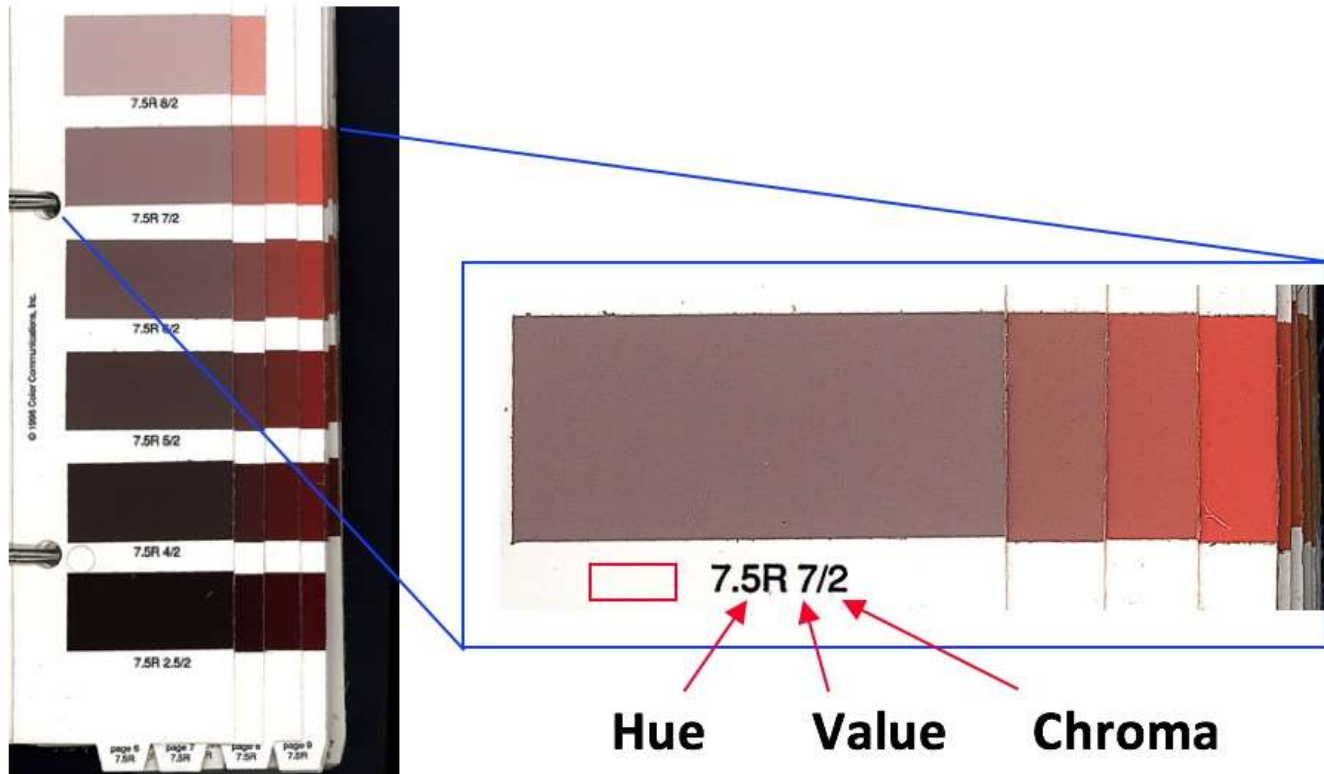
I. Visualize Data

J. Quiz Yourself

K. Additional Resources

Soil Color- Munsell Notation


In the Munsell color system, colors are identified by three properties.





Soil Color- Hue, Value and Chroma

- **Hue** is the color's position on the Color Wheel
- **Value** is the amount of black or white added to the color. The higher the Value, the lighter the color. The lower the Value, the darker the color.
- **Chroma** is the amount of saturation of a color. The higher the Chroma, the more saturated the color.



A. Why characterize soil profiles?

B. Describe the soil profile

C. Soil Structure

D. Soil Color

E. Soil Consistence

F. Soil Texture

G. Rocks, Roots, and Carbonates

H. Report Data to GLOBE

I. Visualize Data

J. Quiz Yourself

K. Additional Resources



How to Observe Soil Color- Prepare the Ped

A. Why characterize soil profiles?

B. Describe the soil profile

C. Soil Structure

D. Soil Color

E. Soil Consistence

F. Soil Texture

G. Rocks, Roots, and Carbonates

H Report Data to GLOBE

I. Visualize Data

J. Quiz Yourself

K. Additional Resources

Take a ped of soil from a horizon and note on the data entry page whether it is moist, dry or wet.

If it is dry, moisten it slightly with water from your water bottle. Wait for a minute for the water to soak into the ped.

Stand with the sun over your shoulder so that sunlight shines on the color chart and the soil sample you are examining.

If the soil is too loose to form a single ped, place a sample on a trowel and complete the protocol.

Be sure no shadows fall on the color book.





A. Why characterize soil profiles?

B. Describe the soil profile

C. Soil Structure

D. Soil Color

E. Soil Consistence

F. Soil Texture

G. Rocks, Roots, and Carbonates

H Report Data to GLOBE

I. Visualize Data

J. Quiz Yourself

K. Additional Resources

How to Observe Soil Color- Steps

Break the ped and compare the color of the inside surface with the soil color chart.



Look through the entire book as some similar soil colors appear throughout the book.



Sometimes, a soil sample may have more than one color. If so record a maximum of two colors, and indicate (1) the Main (dominant color) and (2) the Other (secondary) color. This is only when your sample contains two distinctly different colors. It is not two estimates for the same color





Horizon Properties: Soil Consistence

A. Why characterize soil profiles?

B. Describe the soil profile

C. Soil Structure

D. Soil Color

E. Soil Consistence

F. Soil Texture

G. Rocks, Roots, and Carbonates

H. Report Data to GLOBE

I. Visualize Data

J. Quiz Yourself

K. Additional Resources





What Soil Consistence Reveals

Consistence is determined by how easily soil aggregates break apart

Whether a soil is **Loose**, **Friable**, **Firm**, or **Extremely Firm** determines how easy it is for roots, worms, or plows to pass through the soil.

It also indicates whether animals can create burrows in the ground or if the soil would collapse unless reinforced in some way.



Loose



Friable



Firm



Extremely Firm

A. Why characterize soil profiles?

B. Describe the soil profile

C. Soil Structure

D. Soil Color

E. Soil Consistence

F. Soil Texture

G. Rocks, Roots, and Carbonates

H. Report Data to GLOBE

I. Visualize Data

J. Quiz Yourself

K. Additional Resources



What is Soil Consistence?

Consistence describes the firmness of the individual peds and the ease with which they break apart.

The terms used to describe soil consistence are loose, friable, firm, and extremely firm.

For example, a soil with friable consistence will be easier for roots, shovels, or plows to move through than a soil with a firm consistence. On the other hand, a soil with extremely firm consistence will be harder for roots, shovels, and trowels to move through.

To complete the protocol, you will need:



A ped of soil



A spray mist bottle

A. Why characterize soil profiles?

B. Describe the soil profile

C. Soil Structure

D. Soil Color

E. Soil Consistence

F. Soil Texture
G. Rocks, Roots, and Carbonates

H. Report Data to GLOBE

I. Visualize Data

J. Quiz Yourself

K. Additional Resources



Identify Soil Consistence

Record one of the following categories of soil ped consistence on the Soil Characterization Data Entry Page.

A. Why characterize soil profiles?

B. Describe the soil profile

C. Soil Structure

D. Soil Color

E. Soil Consistence

F. Soil Texture

G. Rocks, Roots, and Carbonates

H. Report Data to GLOBE

I. Visualize Data

J. Quiz Yourself

K. Additional Resources

Loose* You have trouble picking out a single ped and the structure falls apart before you handle it.*



Firm

The ped breaks when you apply a good amount of pressure and dents your fingers before it breaks.



Friable

The ped breaks with a small amount of pressure.



Extremely Firm

The ped can't be crushed with your fingers (you need a hammer!).



* Soils with “single grained” structure **always** have loose consistence. 33



Horizon Properties: Soil Texture



- A. Why characterize soil profiles?
- B. Describe the soil profile
- C. Soil Structure
- D. Soil Color
- E. Soil Consistence
- F. Soil Texture
- G. Rocks, Roots, and Carbonates
- H Report Data to GLOBE
- I. Visualize Data
- J. Quiz Yourself
- K. Additional Resources



A. Why characterize soil profiles?

B. Describe the soil profile

C. Soil Structure

D. Soil Color

E. Soil Consistence

F. Soil Texture

G. Rocks, Roots, and Carbonates

H Report Data to GLOBE

I. Visualize Data

J. Quiz Yourself

K. Additional Resources

Definitions of Sand, Silt, and Clay

The way a soil “feels” is called soil texture.

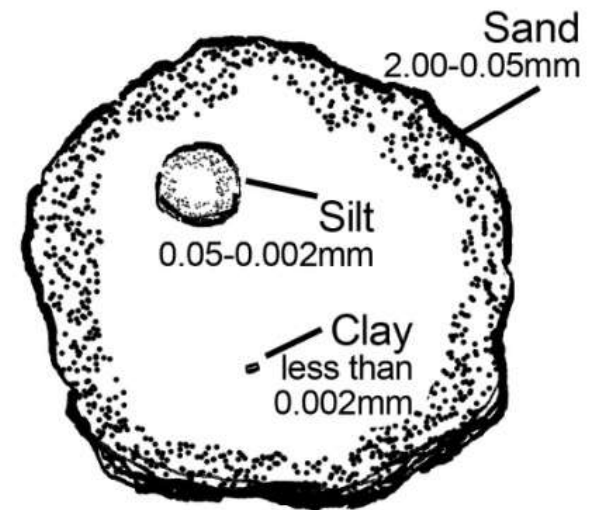
Soil texture depends on the amount of each size of particle in the soil.

Sand, silt, and clay are names that describe the size of individual particles in the soil.

-Sand are the largest particles and they feel “gritty.”

-Silt are medium sized, and they feel soft, silky or “floury.”

-Clay are the smallest sized particles, and they feel “sticky,” and they are hard to squeeze.



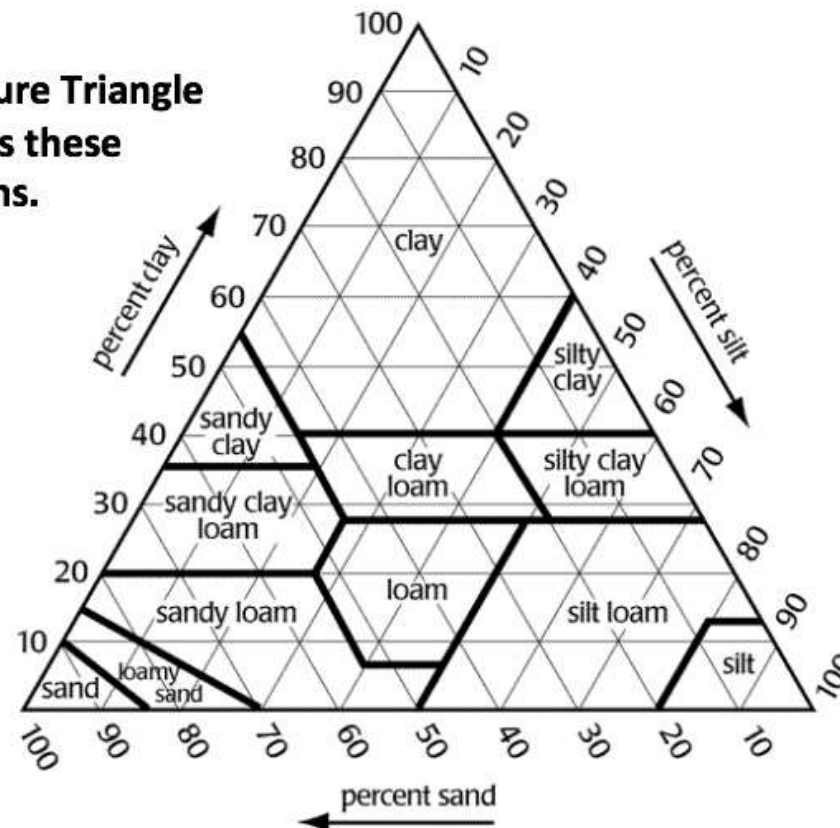
Particle Size Comparison



The Soil Texture Triangle

Soils are grouped into 12 texture class names depending on how much sand, silt, and clay is in each sample.

The Texture Triangle illustrates these definitions.





Soil Texture: Required Equipment

To determine this soil property, you will need:

A small handful of soil



A spray mist bottle



- A. Why characterize soil profiles?
- B. Describe the soil profile
- C. Soil Structure
- D. Soil Color
- E. Soil Consistence
- F. Soil Texture
- G. Rocks, Roots, and Carbonates
- H Report Data to GLOBE
- I. Visualize Data
- J. Quiz Yourself
- K. Additional Resources



A. Why characterize soil profiles?

B. Describe the soil profile

C. Soil Structure

D. Soil Color

E. Soil Consistence

F. Soil Texture

G. Rocks, Roots, and Carbonates

H Report Data to GLOBE

I. Visualize Data

J. Quiz Yourself

K. Additional Resources

Determining Soil Texture: Step 1: Is it Sand?

To determine soil texture by feel, use this method. Take a handful of soil and moisten it. Let the water soak in and then work the soil with your fingers. Try to make a ball with the soil.

If it does not make a ball, it is sand.

Soil texture is complete. If the soil Makes a ball, go to the next step.





A. Why characterize soil profiles?

B. Describe the soil profile

C. Soil Structure

D. Soil Color

E. Soil Consistence

F. Soil Texture

G. Rocks, Roots, and Carbonates

H Report Data to GLOBE

I. Visualize Data

J. Quiz Yourself

K. Additional Resources

Determining Soil Texture: Step 2: Is it Loamy Sand?

Squeeze the soil ball, and try to make a ribbon between your two fingers.

If the soil does not make a ribbon, call it a **Loamy Sand.**, and Soil Texture is complete.

If the soil makes a ribbon, go to the next steps. First the length of the ribbon will determine whether it is a **Clay**, a **Clay Loam**, or a **Loam**





A. Why characterize soil profiles?

B. Describe the soil profile

C. Soil Structure

D. Soil Color

E. Soil Consistence

F. Soil Texture

G. Rocks, Roots, and Carbonates

H Report Data to GLOBE

I. Visualize Data

J. Quiz Yourself

K. Additional Resources

Determining Soil Texture: Step 3: Is it Clay?

Feel for clay. Does the soil stain your hands and keep its shape in your hand? Is it sticky and hard to squeeze? Is it shiny?

Does the sample make a **long** ribbon of about 5cm? There is a lot of clay, it is a **Clay**, and you will feel for sand or silt in step 4.



Images courtesy of Izolda Ivakhnenko



A. Why characterize soil profiles?

B. Describe the soil profile

C. Soil Structure

D. Soil Color

E. Soil Consistence

F. Soil Texture

G. Rocks, Roots, and Carbonates

H Report Data to GLOBE

I. Visualize Data

J. Quiz Yourself

K. Additional Resources

Determining Soil Texture: Step 3: Is it Clay Loam?

If there is some clay but it is softer than a dense clay and makes a ribbon that is about 2-5 cm long, it is a **Clay Loam**, and you will feel for sand or silt in step 4. **If not**, go to the next step.





A. Why characterize soil profiles?

B. Describe the soil profile

C. Soil Structure

D. Soil Color

E. Soil Consistence

F. Soil Texture

G. Rocks, Roots, and Carbonates

H Report Data to GLOBE

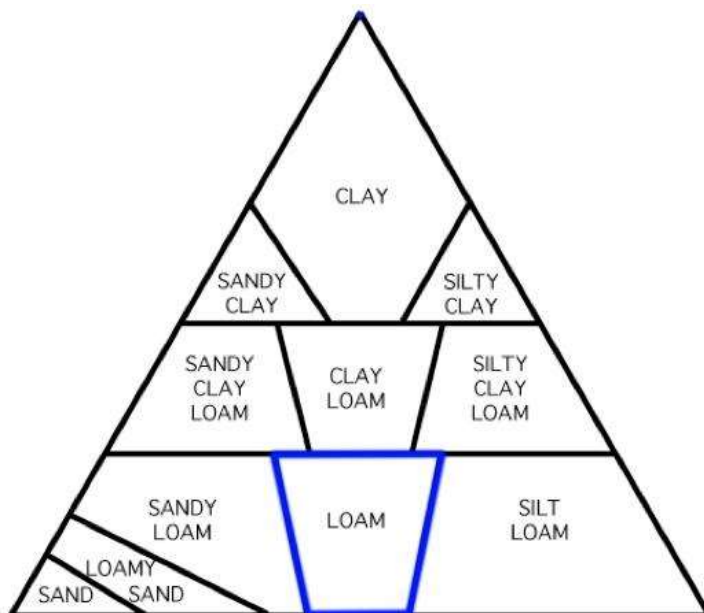
I. Visualize Data

J. Quiz Yourself

K. Additional Resources

Determining Soil Texture: Step 3: Is it a Loam?

If it is very soft with just a little clay and makes a short ribbon of less than 2 cm, it is a **Loam**, and you will feel for sand or silt in step 4.





A. Why characterize soil profiles?

B. Describe the soil profile

C. Soil Structure

D. Soil Color

E. Soil Consistence

F. Soil Texture

G. Rocks, Roots, and Carbonates

H Report Data to GLOBE

I. Visualize Data

J. Quiz Yourself

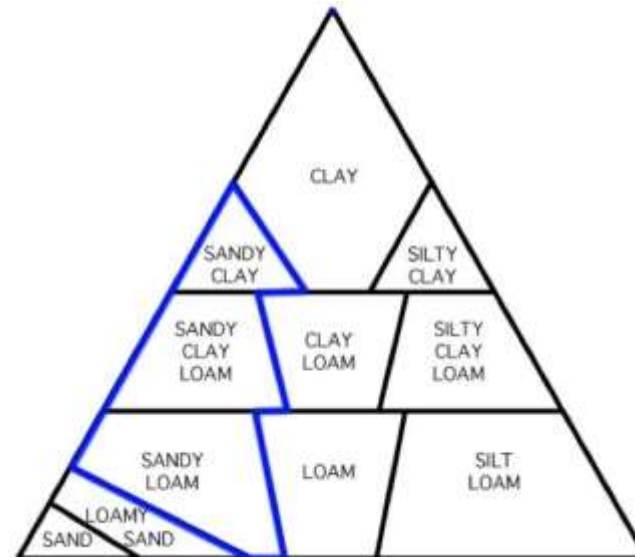
K. Additional Resources

Determining Soil Texture: Step 4: Is it Sandy?

Wet a small pinch of the soil in your palm and rub it with a forefinger. If the soil feels very gritty it is sandy.

Add the word “sandy” to your original soil texture name from step 3; it is either **Sandy Clay**, **Sandy Clay Loam**, or **Sandy Loam**. Soil Texture is complete.

If not, go to next step.





A. Why characterize soil profiles?

B. Describe the soil profile

C. Soil Structure

D. Soil Color

E. Soil Consistence

F. Soil Texture

G. Rocks, Roots, and Carbonates

H Report Data to GLOBE

I. Visualize Data

J. Quiz Yourself

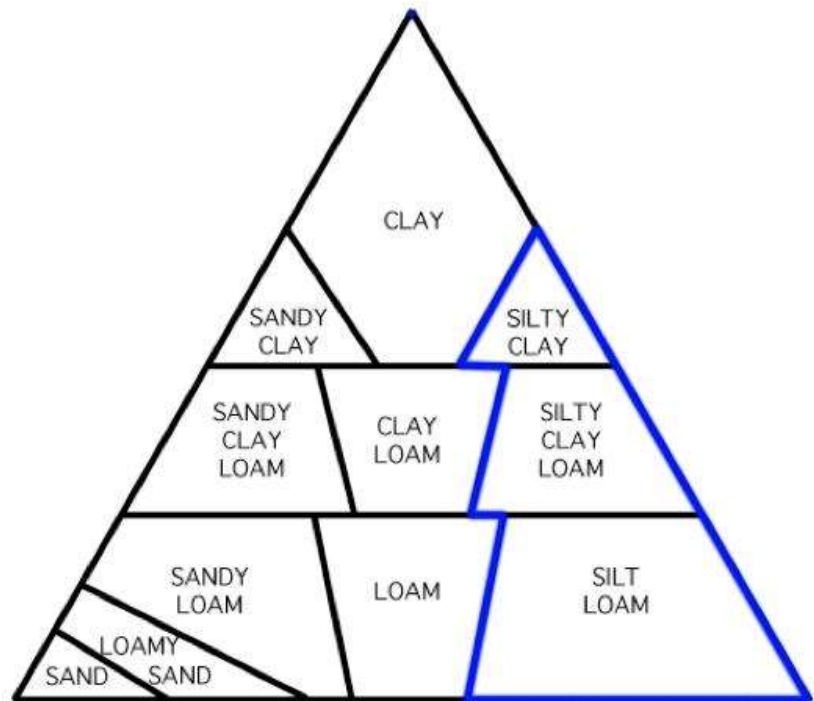
K. Additional Resources

Determining Soil Texture: Step 4: Is it Silky?

If the soil feels very soft and smooth with no gritty feeling it is silty.

Add the word Silt or Silty to the original classification from step 3; it is either **Silty Clay**, **Silty Clay Loam**, or **Silt Loam**.

If not, go to next step.

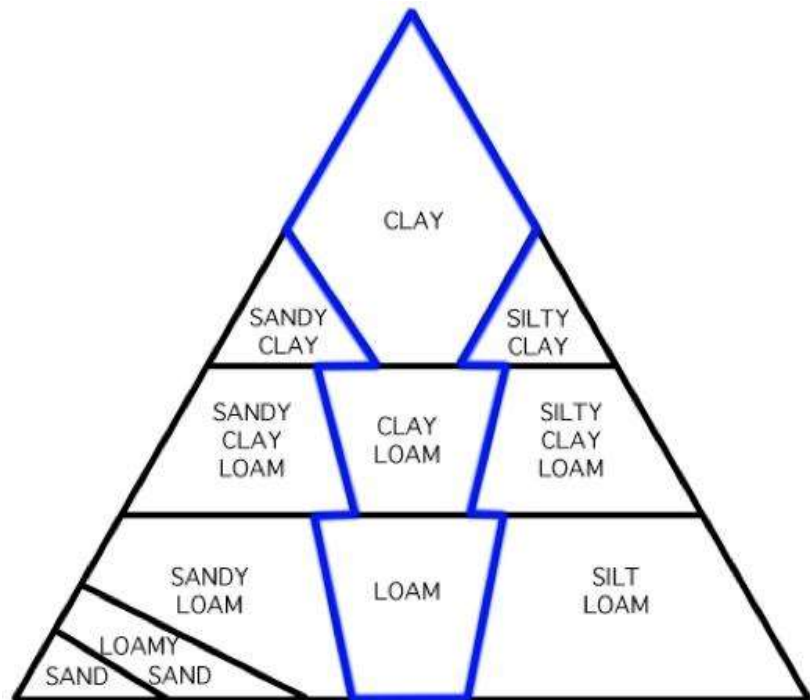




Determining Soil Texture: Step 4: Is it Neither Sandy or Silky?

If the soil feels neither very gritty nor very soft, it is **Clay**, **Clay Loam**, or **Loam**.

Soil Texture is complete.





Horizon Properties: Roots, Rock and Carbonates



A. Why characterize soil profiles?

B. Describe the soil profile

C. Soil Structure

D. Soil Color

E. Soil Consistence

F. Soil Texture

G. Rocks, Roots, and Carbonates

H. Report Data to GLOBE

I. Visualize Data

J. Quiz Yourself

K. Additional Resources



What the Presence of Roots, Rocks and Carbonates Reveals

Knowing the amount of roots in each horizon allows scientists to estimate the soil's fertility, bulk density, water holding capacity, and depth.

An estimate of the number of rocks in each horizon helps to understand the movement of water, heat, and air through the soil, root growth, and the amount of soil material involved in chemical and physical reactions.

The presence of carbonates in soil may indicate a dry climate or a particular type of parent material rich in calcium, such as limestone.



A. Why characterize soil profiles?

B. Describe the soil profile

C. Soil Structure

D. Soil Color

E. Soil Consistence

F. Soil Texture

G. Rocks, Roots, and Carbonates

H Report Data to GLOBE

I. Visualize Data

J. Quiz Yourself

K. Additional Resources



Horizon Properties: Roots

An estimate of the roots in each horizon in a soil profile illustrates the depth to which roots go to obtain nutrients and water.

The more roots found in a horizon, the more water and nutrients are being removed from the soil, and the more organic matter being returned.

Observe and record if they are **none**, **few** or **many** roots or root fragments in each horizon.



- A. Why characterize soil profiles?
- B. Describe the soil profile
- C. Soil Structure
- D. Soil Color
- E. Soil Consistence
- F. Soil Texture
- G. Rocks, Roots, and Carbonates
- H. Report Data to GLOBE
- I. Visualize Data
- J. Quiz Yourself
- K. Additional Resources



A. Why
characterize
soil profiles?

B. Describe the
soil profile

C. Soil Structure

D. Soil Color

E. Soil
Consistence

F. Soil Texture

G. Rocks, Roots,
and Carbonates

H Report Data
to GLOBE

I. Visualize Data

J. Quiz Yourself


K. Additional
Resources

Horizon Properties: Rocks

An estimate of the number of rocks in each horizon helps to understand the movement of water, heat, and air through the soil, root growth, and the amount of soil material involved in chemical and physical reactions.

Soil particles greater than 2 mm in size are considered to be rocks or pebbles.

Observe and record if there are **none**, **few** or **many** rocks or rock fragments in the horizon





- A. Why characterize soil profiles?
- B. Describe the soil profile
- C. Soil Structure
- D. Soil Color
- E. Soil Consistence
- F. Soil Texture
- G. Rocks, Roots, and Carbonates
- H Report Data to GLOBE
- I. Visualize Data
- J. Quiz Yourself
- K. Additional Resources

Horizon Properties: Free Carbonates

The presence of carbonates in soil may indicate a dry climate or a particular type of parent material rich in calcium, such as limestone. Free carbonates often coat soil particles in soils that are basic ($\text{pH} > 7$).

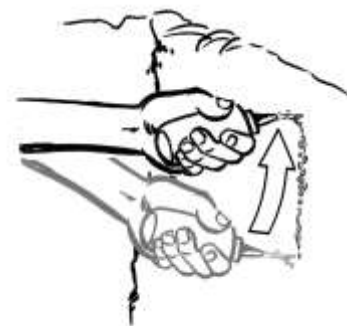
If carbonates are present, there will be a chemical reaction between vinegar (a mild acid) and the carbonates (a base) producing carbon dioxide and causing the vinegar to bubble or effervesce.

The more carbonates present, the more effervescence occurs.

Set aside a portion of the exposed soil to use for the free carbonates test. Do not touch it with your bare hands.

Open the acid bottle and squirt vinegar on the soil particles. Start from the bottom of the profile and move up.

Be sure to use caution and point the bottle directly at the soil, not toward other people, especially toward eyes.





A. Why
characterize
soil profiles?

B. Describe the
soil profile

C. Soil Structure

D. Soil Color

E. Soil
Consistence

F. Soil Texture

G. Rocks, Roots,
and Carbonates

H. Report Data
to GLOBE

I. Visualize Data

J. Quiz Yourself

K. Additional
Resources

Observing Free Carbonates

Look carefully for the presence of effervescence. The more carbonates that are present, the more bubbles (effervescence) you will observe.

Observe and record whether the effervescence is **none**, **slight** or **strong**.

None: if you observe no reaction, the soil has no free carbonates present.

Slight: if you observe a very slight bubbling action; this indicates the presence of some carbonates.

Strong: if there is a strong reaction (many, and/or large bubbles). This indicates there may be many carbonates present.





A. Why characterize soil profiles?

B. Describe the soil profile

C. Soil Structure

D. Soil Color

E. Soil Consistence

F. Soil Texture

G. Rocks, Roots, and Carbonates

H Report Data to GLOBE

I. Visualize Data

J. Quiz Yourself

K. Additional Resources

Soil Characterization Data Entry

Featured

2015 Surface Temperature Field Campaign

The GLOBE Program will host its annual surface temperature field campaign from 1-31 December 2015.

[View GLOBE Around the World](#)

[About](#) [Get Trained](#) [Do GLOBE](#) [Join](#) [GLOBE Data](#) [Community](#) [News & Events](#) [Support](#)

RECENT MEASUREMENTS

Crestwood High School, United States, Weatherbug, Measured on: 2015-12-22

[Enter Data](#)

[Visualize Data](#)

To enter data, sign into the website. Click the “Enter Data” button.



Soil (Pedosphere)



Soil Characterization

Soil Characterization Site Data Entry-1

After defining horizons and completing the Soil Characterization Field Measurements, it is time to enter data. Go to Data Entry and select **Site Definition** for your school. Fill in the general site definition information.

Site Definition

Add site type

- ☐ Atmosphere
- ☐ Surface Temperature
- ☐ Hydrology
- ☐ Land Cover/Biology
- ☐ Land Cover
- ☐ Earth as a System
- ☐ Greening
- ☐ Phenological Gardens
- ☒ Soil
- ☐ Soil Characterization
- ☐ Soil Moisture and Temperature
- [Photos →](#)

Site Name * * indicates a field is required

Coordinates

Latitude * North South

Longitude * East West

Elevation * m

Source of Coordinates Data *

☐ GPS ☐ Other

Map

Comments



A. Why characterize soil profiles?

B. Describe the soil profile

C. Soil Structure

D. Soil Color

E. Soil Consistence

F. Soil Texture

G. Rocks, Roots, and Carbonates

H Report Data to GLOBE

I. Visualize Data

J. Quiz Yourself

K. Additional Resources

Soil Characterization Site Data Entry-2

Scroll down the page to Enter Soil Characterization site specific data entry.

.

Soil Characterization [\(Click to edit\)](#) [Expand/Collapse](#) [Remove](#)

Comment



Slope Angle

Method

Land Use

Landscape Position

Parent Material

Cover Type

Distance from Major Features

Do you want to define a horizon at this time? ☐ Yes ☐ No

Create Site

Reset

Click here to open the horizon definition page.



A. Why characterize soil profiles?

B. Describe the soil profile

C. Soil Structure

D. Soil Color

E. Soil Consistence

F. Soil Texture

G. Rocks, Roots, and Carbonates

H Report Data to GLOBE

I. Visualize Data

J. Quiz Yourself

K. Additional Resources

Horizon Properties Data Entry-1

Start by defining horizon 1.

Horizon 1

✕ Remove

Date of Soil Collection

2015-12-14

Top Depth

0

cm

Bottom Depth *

10

cm

Moisture Estimate

moist

Structure Estimate

blocky

Please Note: A printing error has been discovered in GLOBE Soil Color books produced by Visual Color Systems that have a copyright date of 2004 printed on the cover. On pages 15, 19, 22, and 26 the color symbols should contain a 'YR' instead of an 'R'. If you are using one of these GLOBE Soil Color books, please make a manual note of this correction. Revised printings which do not contain this error have '2nd Edition' and a copyright date of 2005 printed on the cover.

Main Color Code ?

Secondary Color Code ?

Enter the top and bottom depths.

Use the drop down menu to select the soil structure for your horizon.

Enter the main color code and the secondary color code if there is one.



A. Why characterize soil profiles?

B. Describe the soil profile

C. Soil Structure

D. Soil Color

E. Soil Consistence

F. Soil Texture

G. Rocks, Roots, and Carbonates

H. Report Data to GLOBE

I. Visualize Data

J. Quiz Yourself

K. Additional Resources

Horizon Properties Data Entry-2

Start by defining horizon 1.

Consistence Estimate: friable

Texture Field Estimate: unknown

Root Quantity Estimate: unknown

Rock Quantity Estimate: unknown

Carbonates: unknown

Comments:

Add your metadata →

→ Add Horizon

When you are finished, click to add the depths and properties of the next horizon.



A. Why characterize soil profiles?

B. Describe the soil profile

C. Soil Structure

D. Soil Color

E. Soil Consistence

F. Soil Texture

G. Rocks, Roots, and Carbonates

H. Report Data to GLOBE

I. Visualize Data

J. Quiz Yourself

K. Additional Resources

Horizon Properties Data Entry-3

Start by defining horizon 1.

When you have completed entering properties for all horizons at the site, click Create Site.

Horizon 3 Remove

Date of Soil Collection
2016-05-10

Top Depth
60 cm

Bottom Depth
100 cm

Moisture Estimate
moist

Structure Estimate
blocky

Please Note: A printing error has been discovered in GLOBE Soil Color books produced by Visual Color Systems that have a copyright date of 2004 printed on the cover. On pages 15, 18, 22, and 26 the color symbols should contain a "YR" instead of an "R". If you are using one of these GLOBE Soil Color books, please make a manual note of this correction. Revised printings which do not contain this error have "2nd Edition" and a copyright date of 2005 printed on the cover.

Main Color Code
7.5R 4/2

Secondary Color Code

Consistence Estimate
firm

Texture Field Estimate
sandy clay

Root Quantity Estimate
none

Rock Quantity Estimate
low

Carbonates
none

Comments
lowest horizon extends below soil pit

Add Horizon

Create Site Reset



Soil Characterization Site Data Visualization

A. Why characterize soil profiles?

B. Describe the soil profile

C. Soil Structure

D. Soil Color

E. Soil Consistence

F. Soil Texture

G. Rocks, Roots, and Carbonates

H Report Data to GLOBE

I. Visualize Data

J. Quiz Yourself

K. Additional Resources

GLOBE Soil Characterization data visualization has several aspects that are different from the visualization of other types of data.

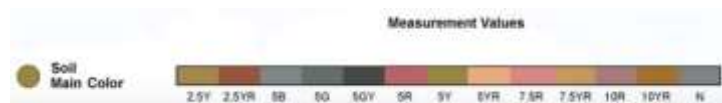
The map shows the data for the most recent soil characterization at every site since the start of this GLOBE protocol. It is a soil map and soil character changes slowly often forming over centuries or longer.

If you change the date of the visualization, data taken more recently than this date will not be shown.

The depth of each horizon is important data; it is not just part of defining the horizon. So, there are visualizations of horizon depth for the top 5 horizons.

It is interesting and useful to know the soil properties for the horizons where soil moisture and temperature data are taken. There are visualizations showing which horizon occurs at these different measurement depths.

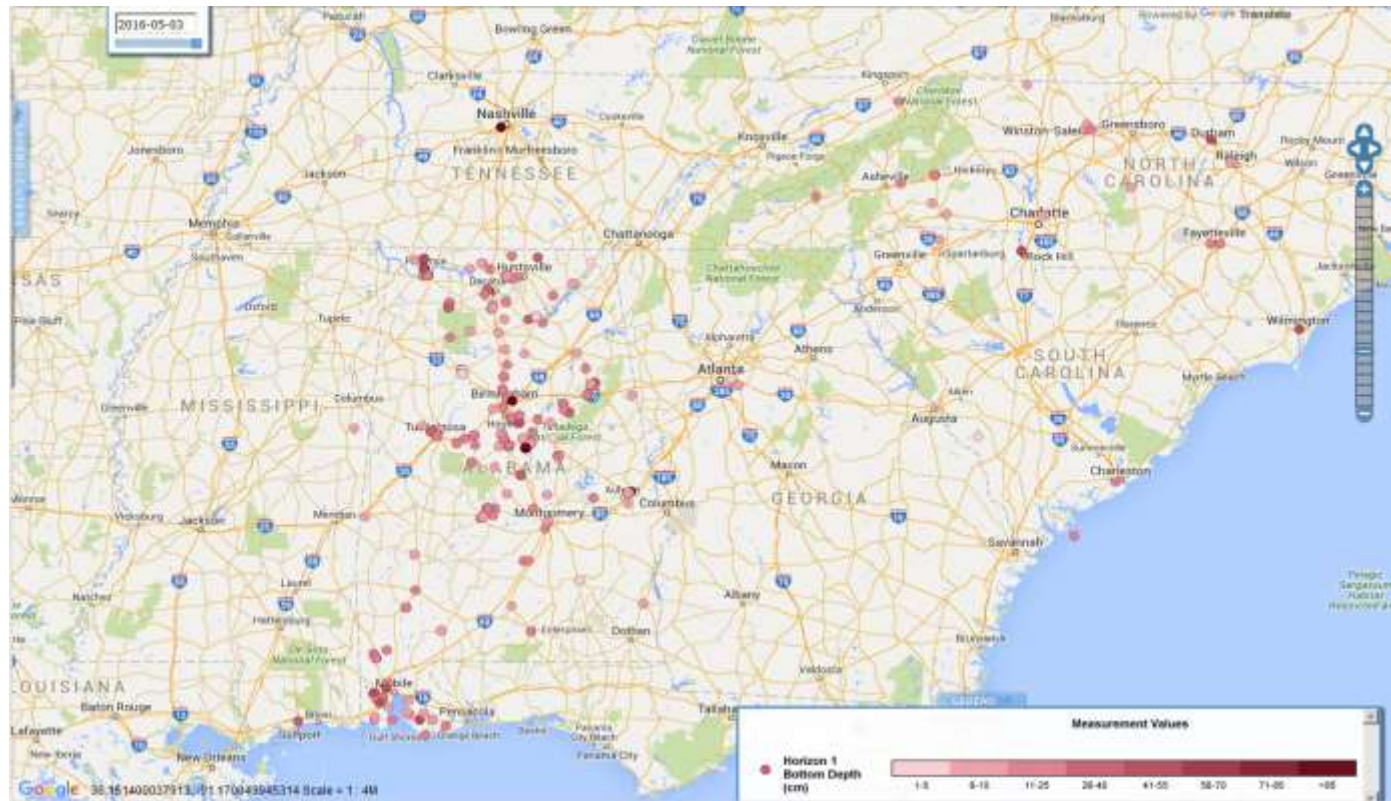
Data from multiple horizons may be displayed by opening multiple data layers and arranging them so that the layer with the smallest dots is on top. In this way, data from the layers appear in a stack (like a child's toy).





Soil Horizon 1 Depth Data Visualization

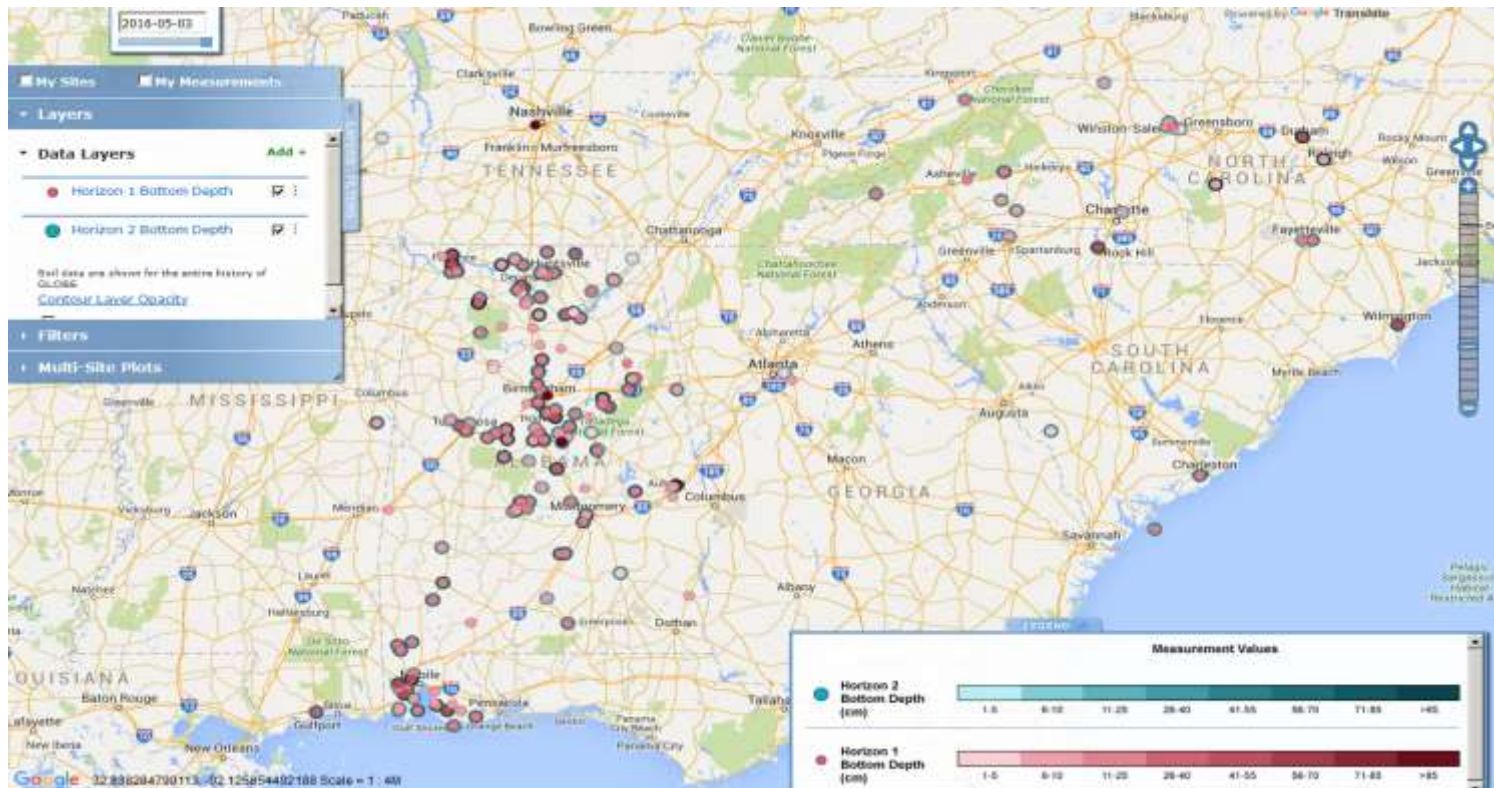
Visualization of the first horizon data shows how deep the top layer extends.





Data Visualization of Horizons 1 & 2

The map dots are different sizes so that you can compare two or more horizons at the same time by adding two data layers. Be sure to have the Horizon 1 data layer on top.





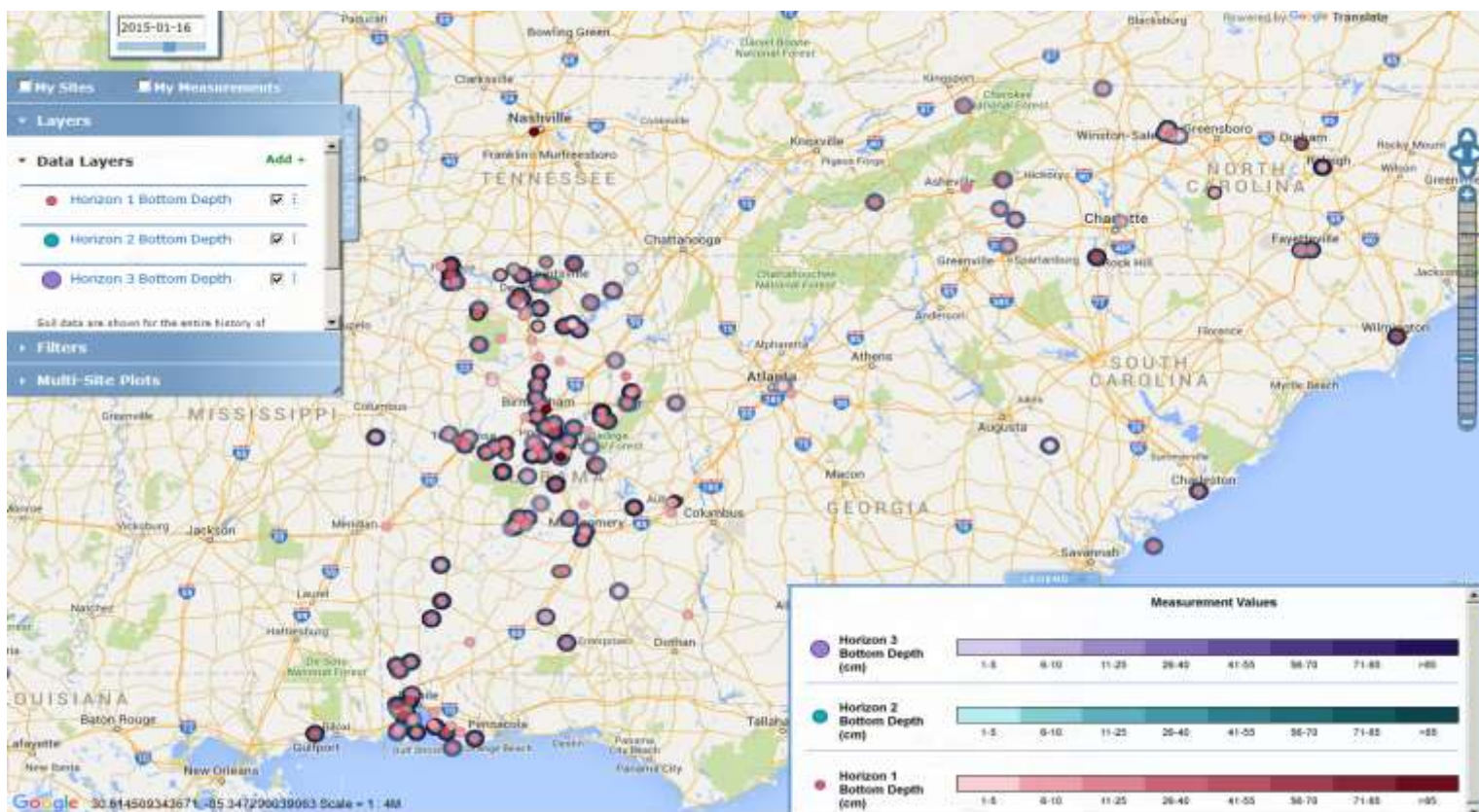
Soil (Pedosphere)



Soil Characterization

Data Visualization of Horizons 1, 2, & 3

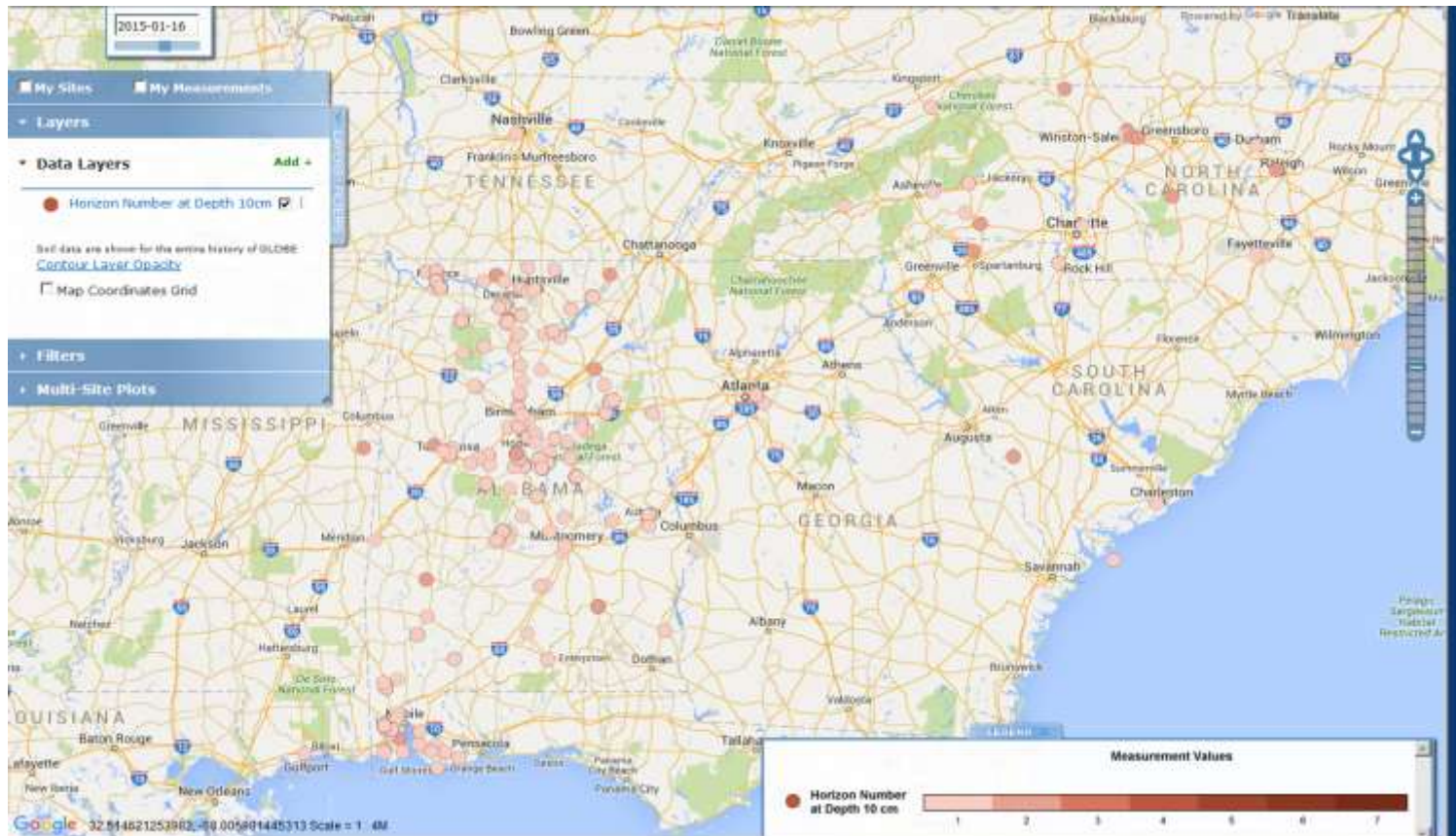
The map shows stacks of dots with horizon 1 on top surrounded by horizon 2 with horizon 3 outermost at sites with 3 horizons reported.





Which Soil Horizon Is at a Depth of 10 cm?

This visualization shows which soil horizon is found 10 cm deep in the soil. Notice that at most but not all sites in this region show Horizon 1 extending to more than 10 cm depth.





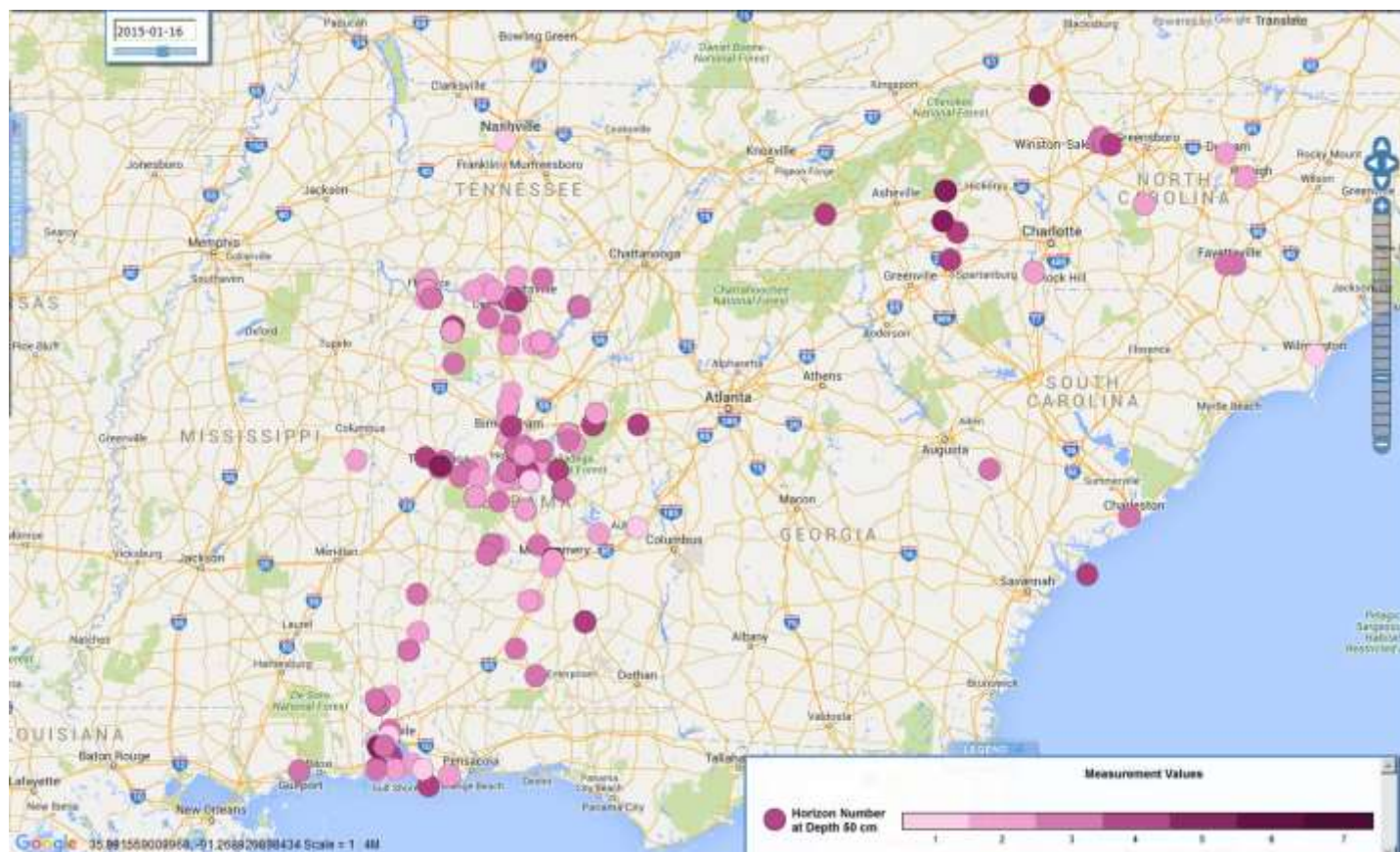
Soil (Pedosphere)



Soil Characterization

Which Soil Horizon Is at a Depth of 50 cm?

This visualization shows which soil horizon is found 50 cm deep in the soil. This depth corresponds to the location of the deepest soil temperature sensor.





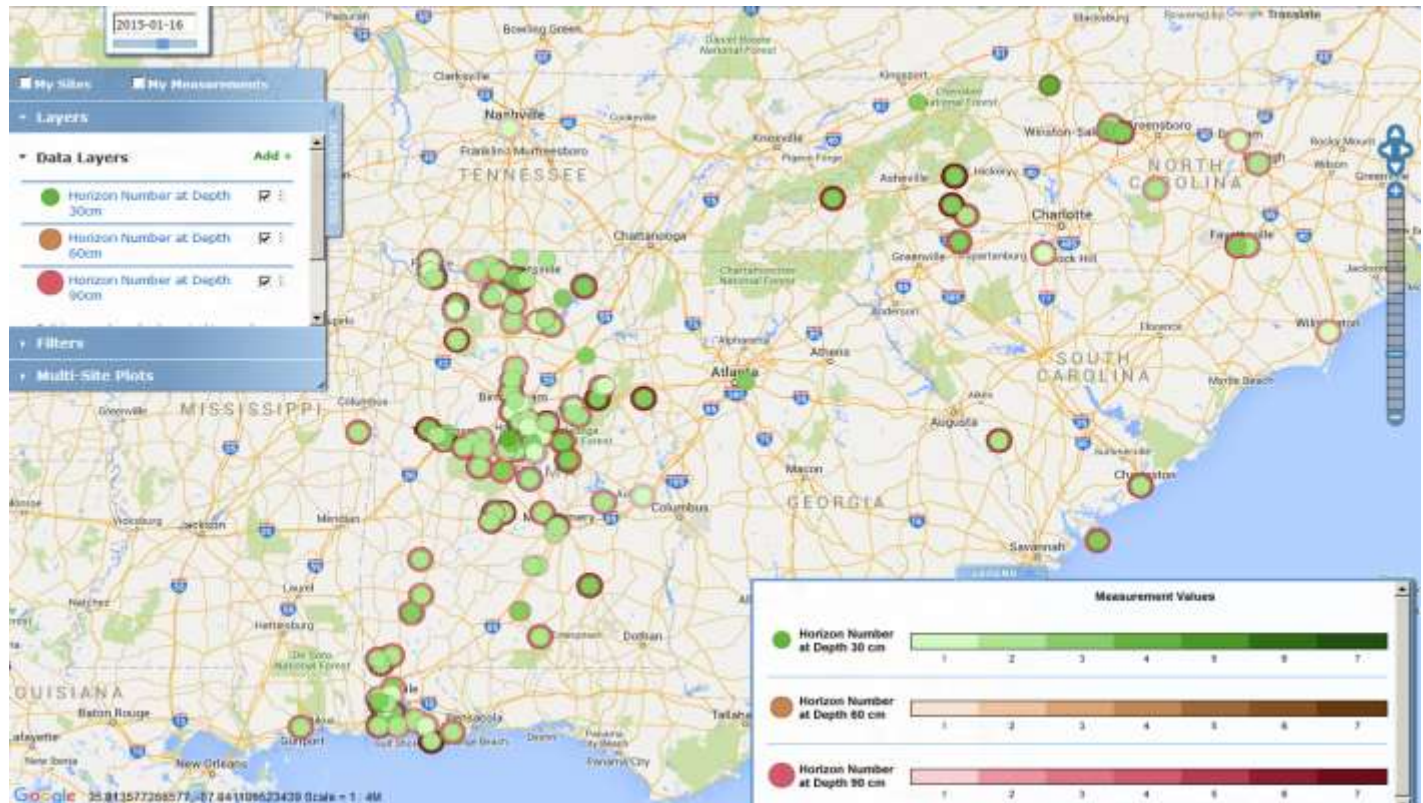
Soil (Pedosphere)



Soil Characterization

Which Soil Horizons Are at 30, 60, & 90 cm?

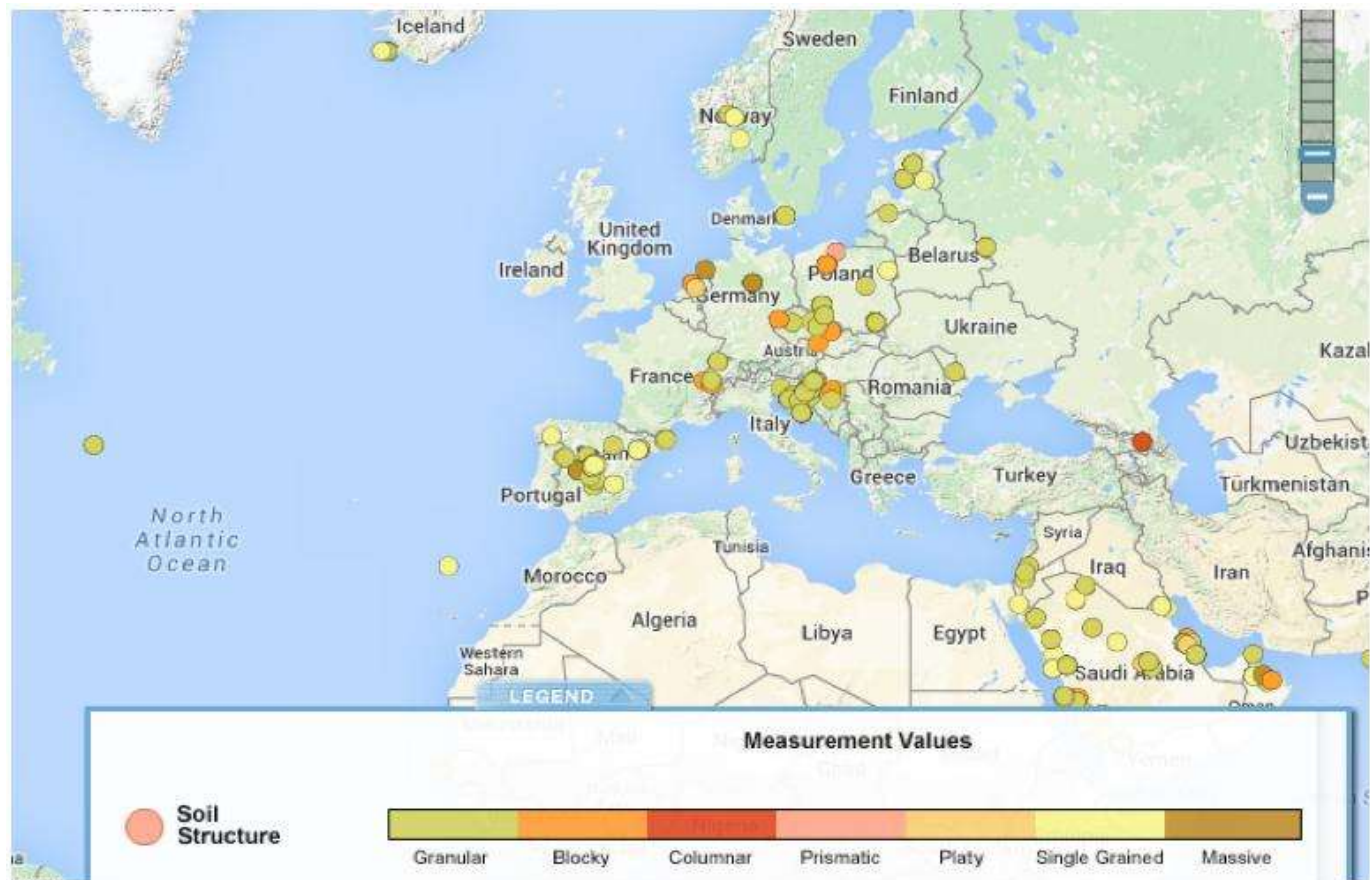
This visualization shows which soil horizons are found at the depths of the three deepest soil moisture measurements. Dots for the three depths are nested on top of one another.





Soil Structure Data Visualization

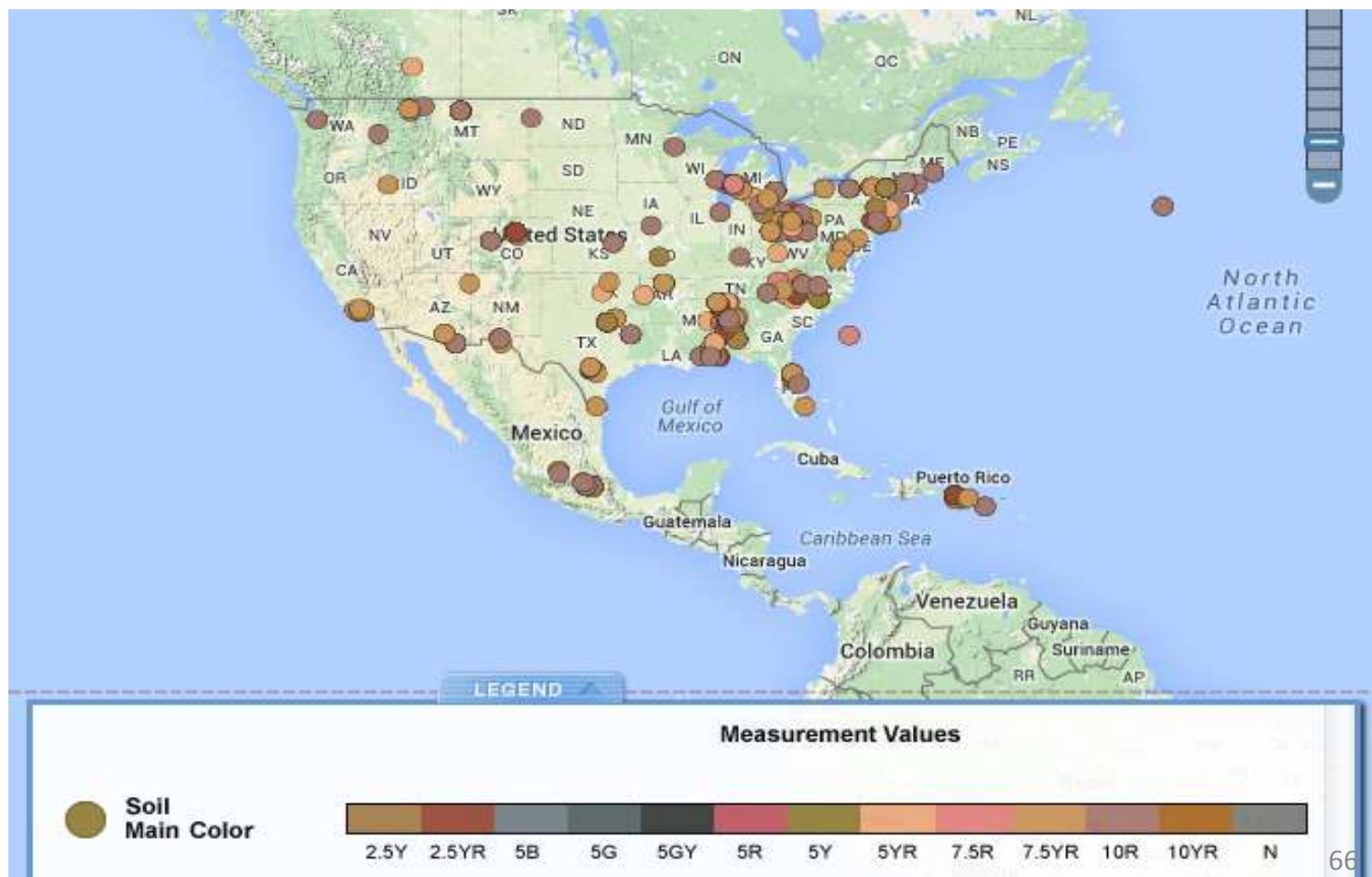
Visualization of the first horizon data shows the soil's Structure values.





Soil Color Data Visualization

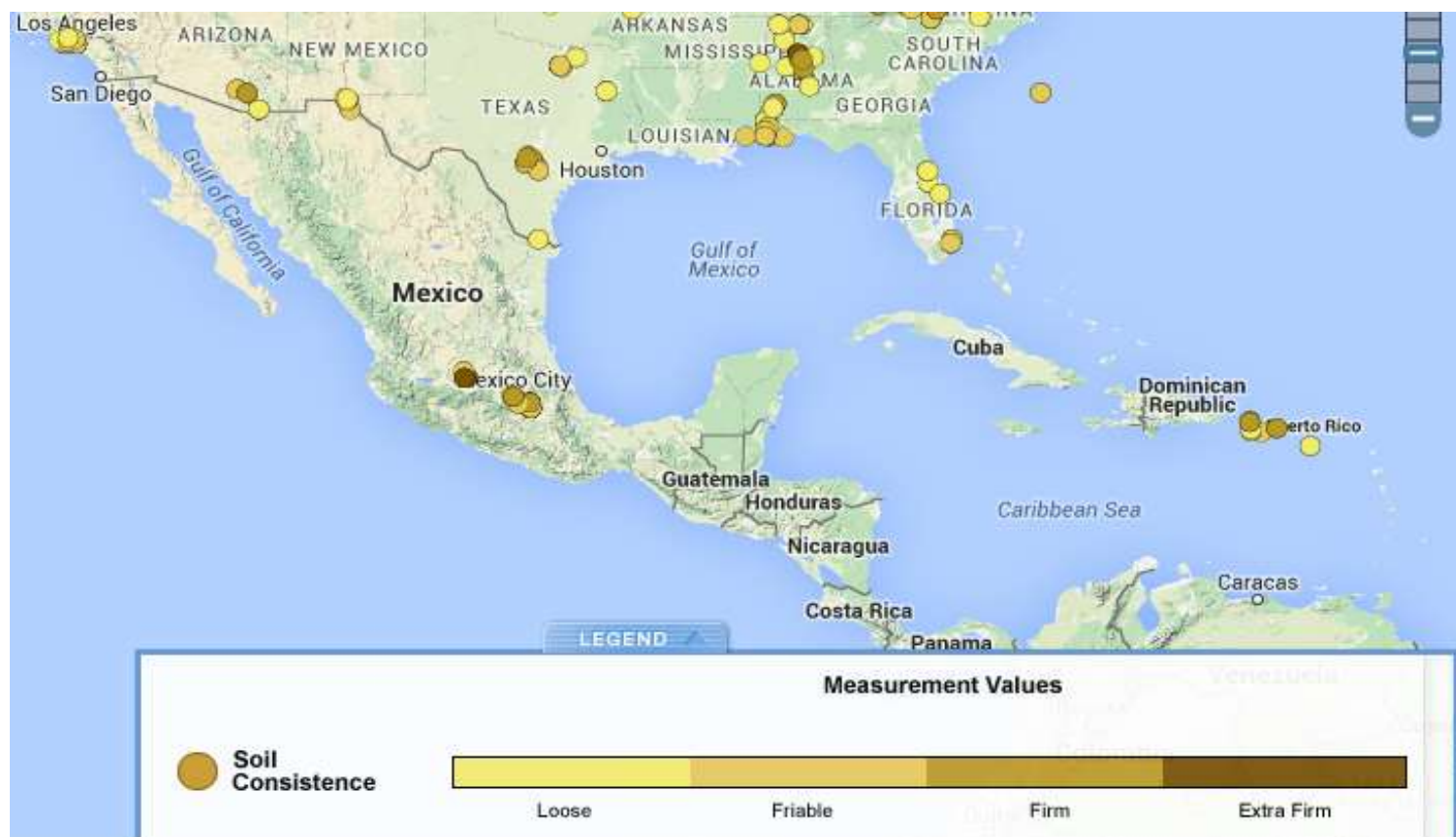
Visualization for the first horizon may provide clues as to the mineral and organic content of these soil samples





Visualizing Soil Consistence Data

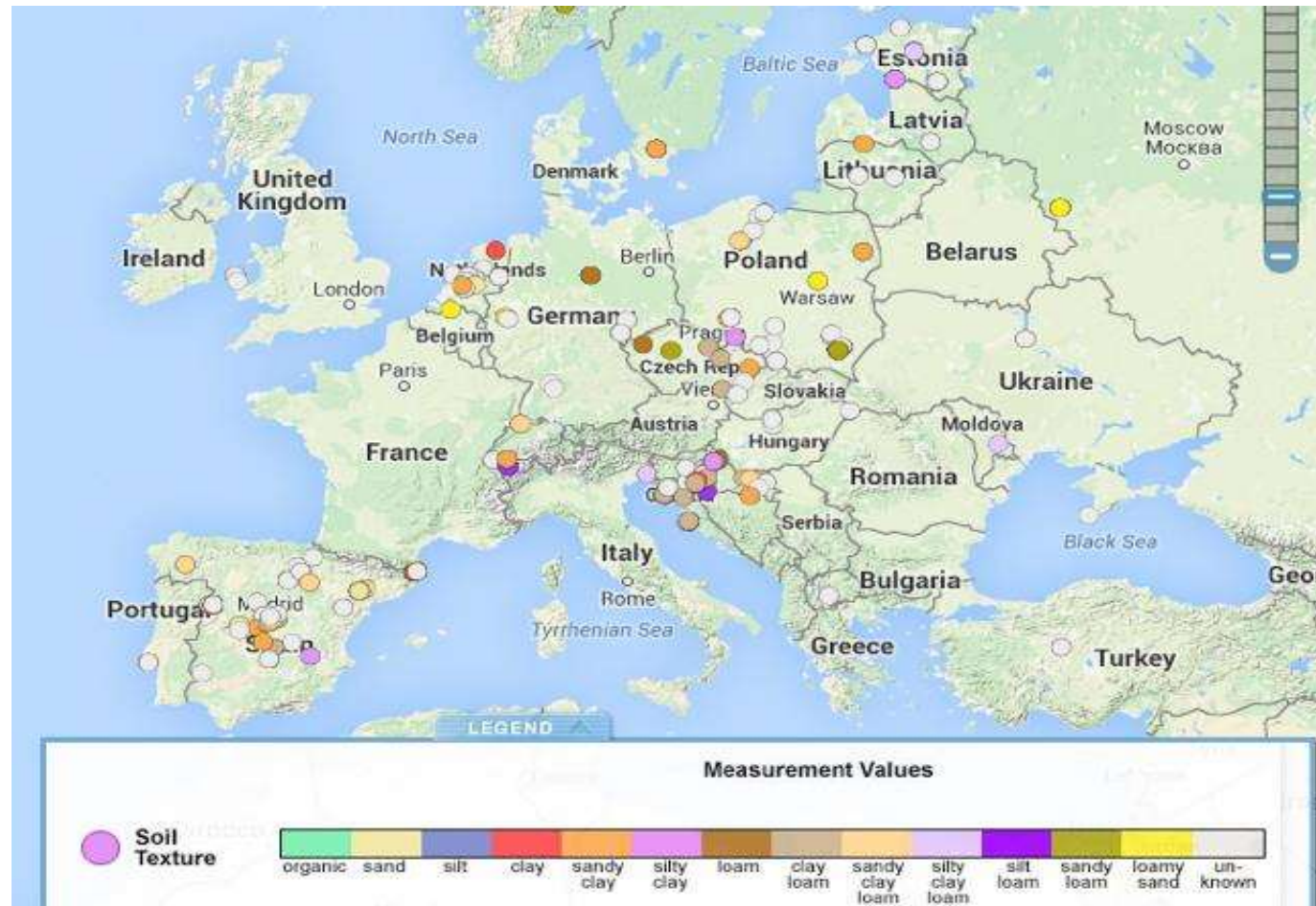
Visualization for the first horizon shows Soil Consistence Measurements.





Soil Texture Data Visualization

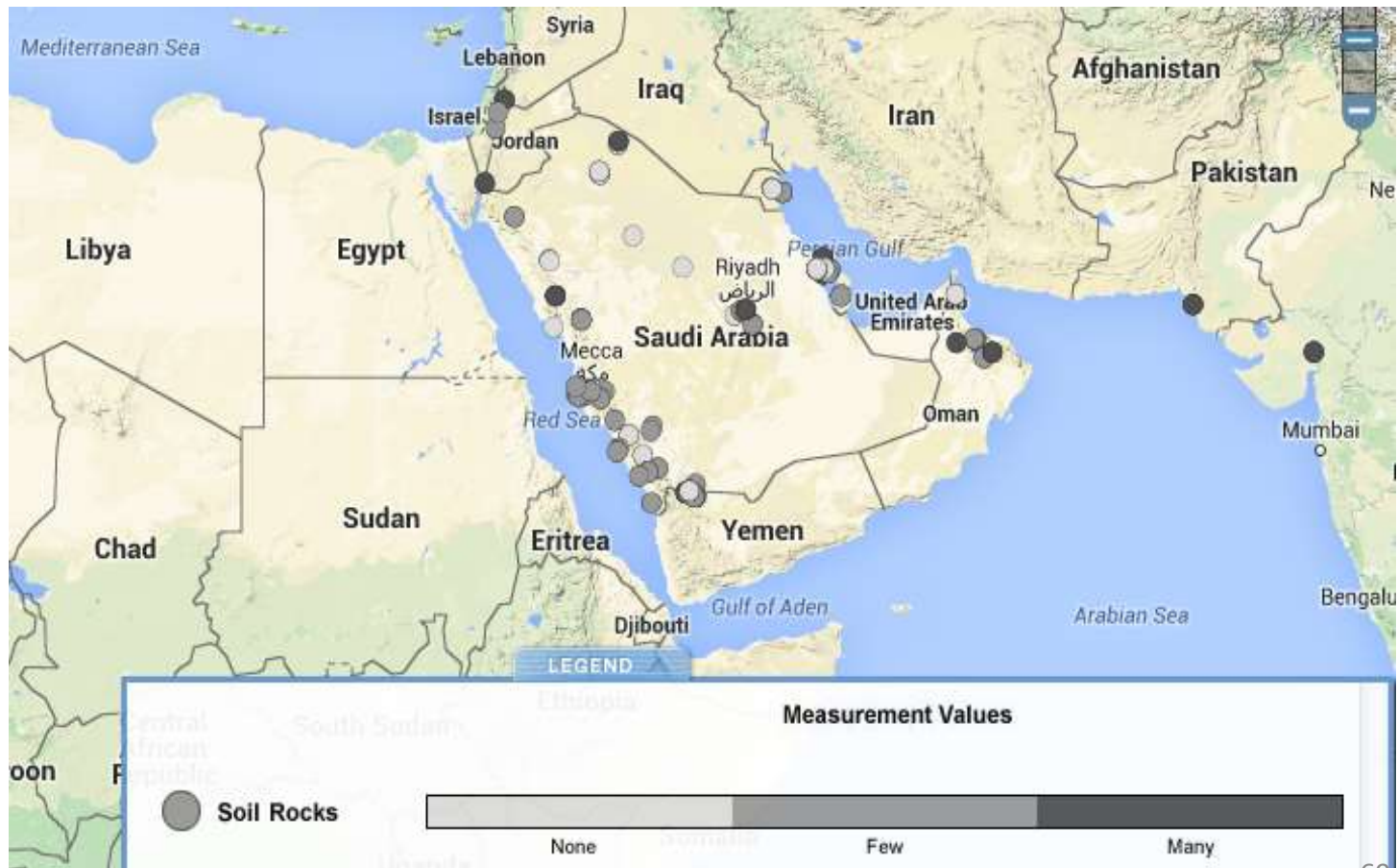
Visualization for the first horizon shows soil's Texture By Feel.





Presence of Roots in Soil Data Visualization

Visualization for the first horizon shows the soil's observed rock content.

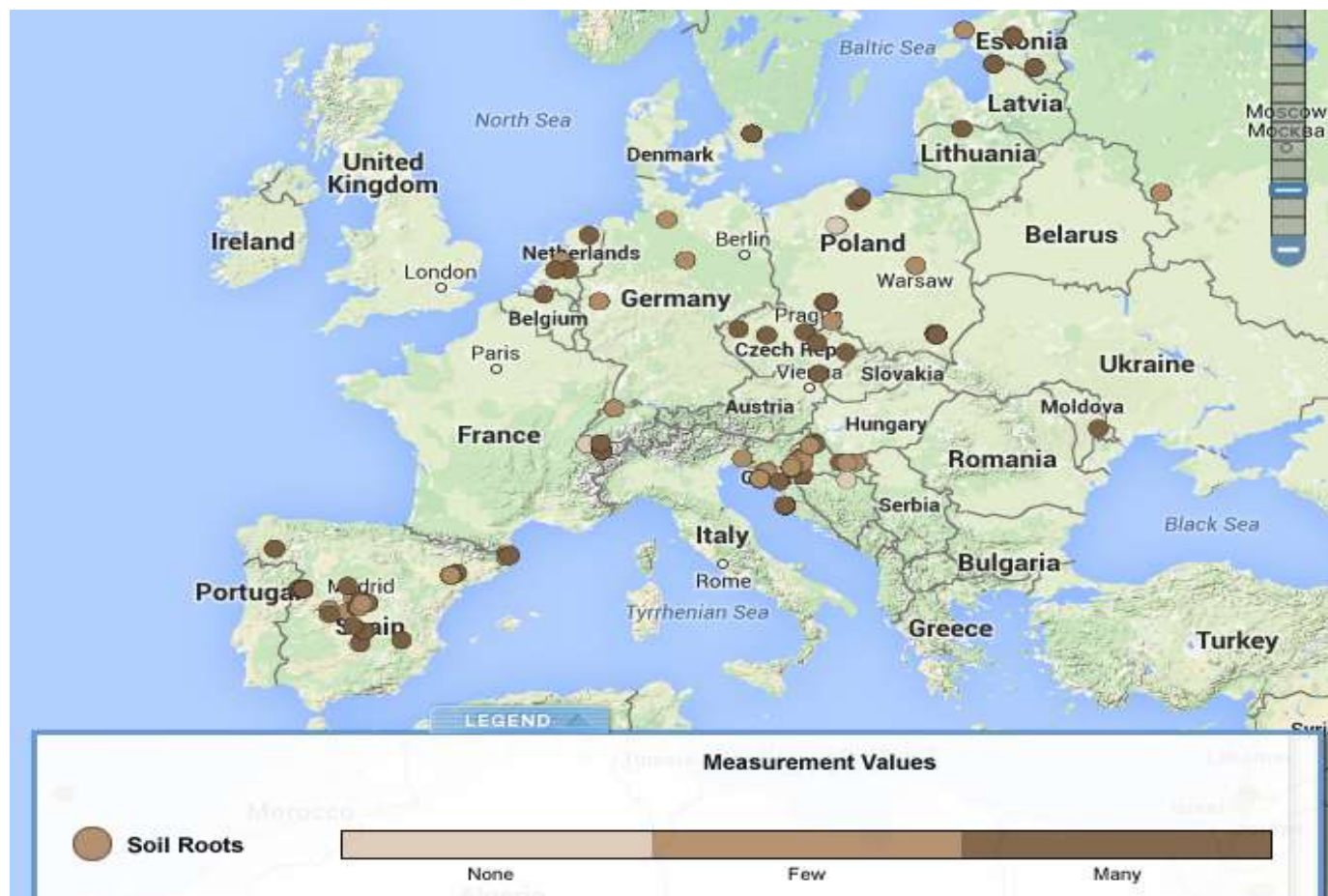




Presence of Roots in Soil Data Visualization

Visualization for the first horizon shows the soil's observed root content.

•





Quiz Yourself

1. What can you learn from soil characterization?
2. You should define your sampling site at least 3 m from path or construction area-why?
3. When would you use the near surface sampling method?
4. Why is it important to take three samples when doing the near surface sampling method?
5. What do you use a compass for in this protocol?
6. A soil sampling site with natural, undisturbed vegetation is ideal. When might you decide to identify a soil sampling site in an area with a lawn or another kind of vegetation?
7. What are the advantages of using the pit sampling method? The auger sampling method?

A. Why characterize soil profiles?

B. Describe the soil profile

C. Soil Structure

D. Soil Color

E. Soil Consistence

F. Soil Texture

G. Rocks, Roots, and Carbonates

H Report Data to GLOBE

I. Visualize Data

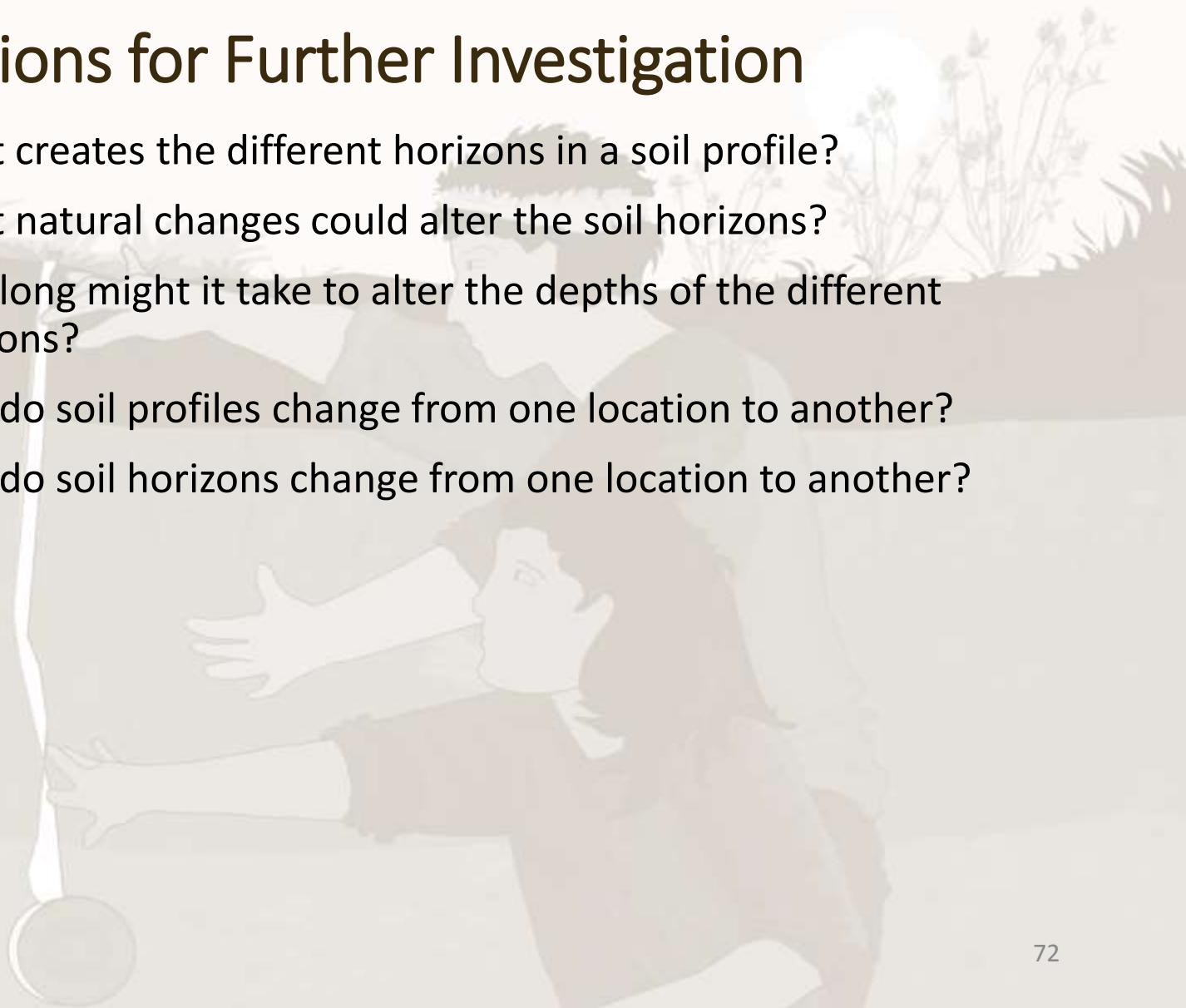
J. Quiz Yourself

K. Additional Resources



Questions for Further Investigation

- What creates the different horizons in a soil profile?
- What natural changes could alter the soil horizons?
- How long might it take to alter the depths of the different horizons?
- How do soil profiles change from one location to another?
- How do soil horizons change from one location to another?



- A. Why characterize soil profiles?
- B. Describe the soil profile
- C. Soil Structure
- D. Soil Color
- E. Soil Consistence
- F. Soil Texture
- G. Rocks, Roots, and Carbonates
- H Report Data to GLOBE
- I. Visualize Data
- J. Quiz Yourself
- K. Additional Resources



Frequently Asked Questions

What do the numbers and letters describing the soil color mean?

- For GLOBE, the universal Munsell notation is used to identify the color of the soil.
- The system is made up of 3 symbols representing the *hue*, *value*, and *chroma* of the soil color.
- The **hue** is described by the first set of number and letter symbols in the Munsell system. Hue represents the position of the color on the color wheel (Y=Yellow, R=Red, G=Green, B=Blue, YR=Yellow Red, RY=Red Yellow).
- The **value** is the number before the slash in the Munsell system. Value indicates the lightness of a color. The scale of value ranges from 0 for pure black to 10 for pure white.
- The **chroma** is the number after the slash in the Munsell system. Chroma describes the “intensity” of a color. Colors of low chroma values are sometimes called weak, while those of high chroma are said to be highly saturated, strong, or vivid. The scale starts at zero, for neutral colors, but there is no arbitrary end to the scale.

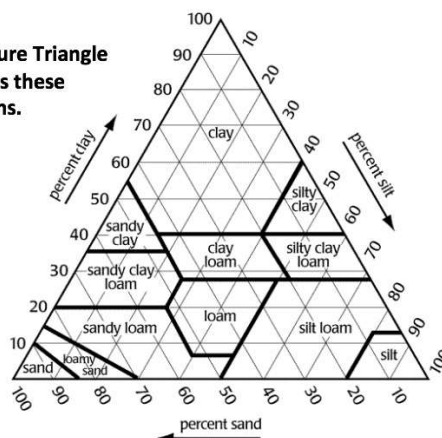


Frequently Asked Questions

What does it mean if I determine that my soil is a silty clay or a sandy loam?

The texture you determine from feeling your soil is a subjective measurement. This means that another person might not think that the soil has exactly the same texture as you do. The texture actually refers to the percentages of sand, silt, and clay present. The triangle below is called a textural triangle and can be used to determine the approximate percentages of sand, silt, and clay in your soil from the texture you determined. For a more objective measure of soil texture, you should perform the [Particle Size Distribution Protocol](#) in which you determine the actual percentages of sand, silt, and clay in the soil.

The Texture Triangle illustrates these definitions.





Soil (Pedosphere)



Selecting, Exposing and Defining a Soil Characterization Site

A. Why
characterize
soil profiles?

B. Describe the
soil profile

C. Soil Structure

D. Soil Color

E. Soil
Consistence

F. Soil Texture

G. Rocks, Roots,
and Carbonates

H Report Data
to GLOBE

I. Visualize Data

J. Quiz Yourself

K. Additional
Resources

Please provide us with feedback about this module. This is a community project and we welcome your comments, suggestions and edits! [eTraining Feedback](#)

Questions about this module: Contact GLOBE eTraining, rLOW@ucar.edu

Slides: Izolda Trachtenberg, Dixon Butler, and Russanne Low

Photographs: Izolda Trachtenberg

Illustrations, unless otherwise identified: Rich Potter

Cover Art: Jenn Glaser, *ScribeArts*

More Information:

[The GLOBE Program](#)

[NASA Earth Science](#)

[NASA Global Climate Change: Vital Signs of the Planet](#)

The GLOBE Program is sponsored by these organizations:



Version 12/1/16. If you edit and modify this slide set for use for educational purposes, please note "modified by (and your name and date)" on this page. Thank you.